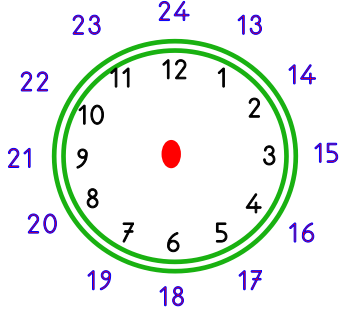


Adı :
Soyadı:

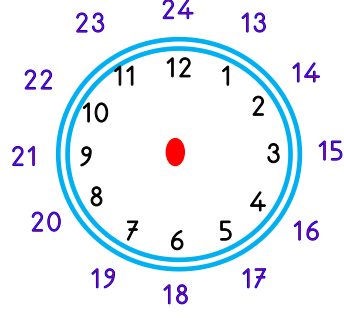
2. Sınıf Matematik

Zamanı Ölçme-5

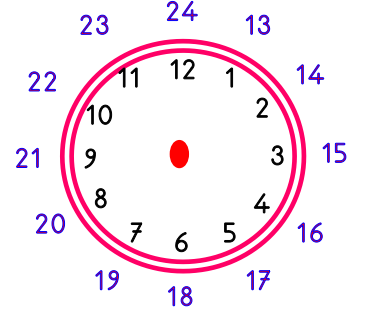
Dijital saatleri analog saat üzerinde çizelim.



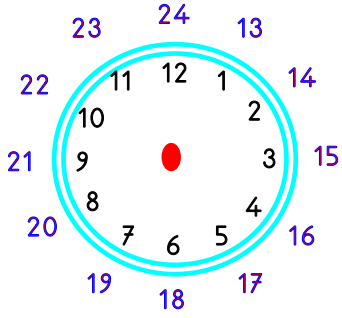
20:00



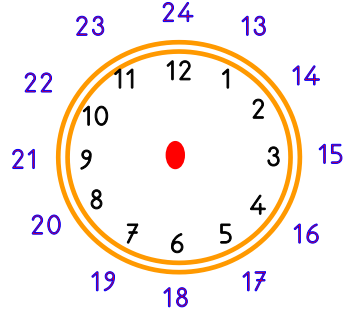
23:30



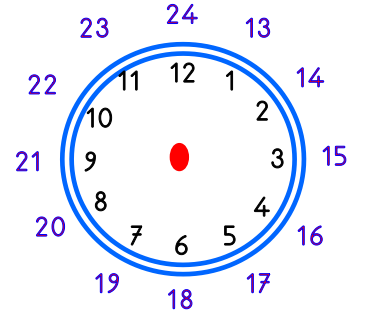
05:15



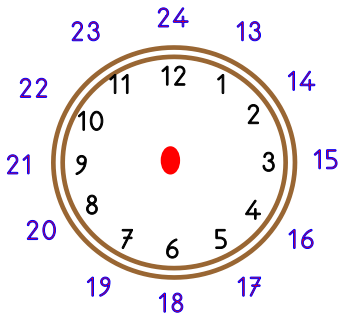
16:45



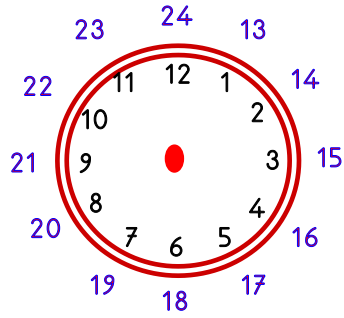
18:00



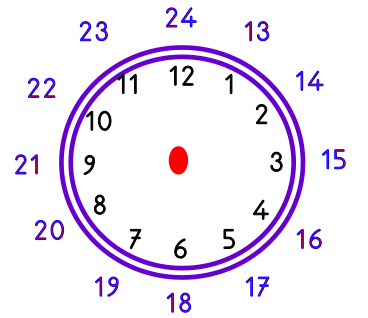
21:30



07:30



14:45



17:15

Adı :
Soyadı:

2. Sınıf
Matematik

Zamanı Ölçme-5

Saatleri örneğe göre yazalım.



Sabah



Öğle



Akşam



Gece



Gece Yarısı

07:15

Saat yediyi çeyrek geçiyor.

Sabah

09:30

.....

.....

12:45

.....

.....

15:30

.....

.....

18:00

.....

.....

20:15

.....

.....

21:30

.....

.....

23:15

.....

.....

01:30

.....

.....

03:45

.....

.....

05:30

.....

.....