

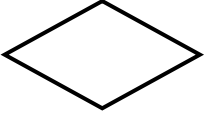
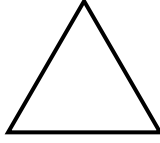
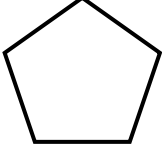
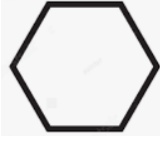






## GEOMETRİK ŞEKİLLER

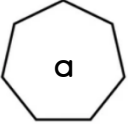
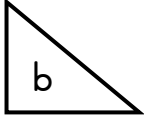


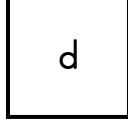

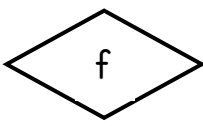
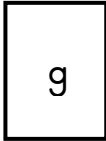
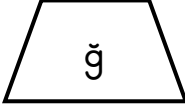
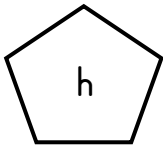


Aşağıdaki geometrik şekillerin adlarını ve kenar sayılarını yazalım.

	Şeklin Adı ..... Kenar Sayısı .....		Şeklin Adı ..... Kenar Sayısı .....
	Şeklin Adı ..... Kenar Sayısı .....		Şeklin Adı ..... Kenar Sayısı .....
	Şeklin Adı ..... Kenar Sayısı .....		Şeklin Adı ..... Kenar Sayısı .....
	Şeklin Adı ..... Kenar Sayısı .....		Şeklin Adı ..... Kenar Sayısı .....



Aşağıdaki geometrik şekilleri kenar sayılarına göre tabloya yazalım.

Üç Kenarlı Şekiller	Dört Kenarlı Şekiller	Beş Kenarlı Şekiller	Altı Kenarlı Şekiller	Yedi Kenarlı Şekiller	Sekiz Kenarlı Şekiller
.....	.....	.....	.....	.....	.....