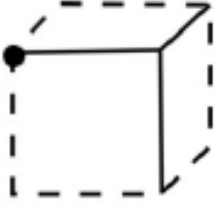
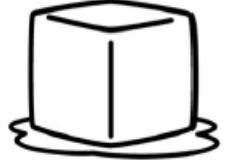


1. SINIF GEOMETRİK CİSİMLER ETKİNLİKLERİ - 1

✚ Cisimlerin noktalarını birleştirip onlara benzeyen nesnelere boyayınız.



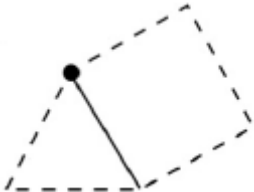
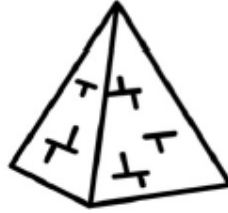
küp



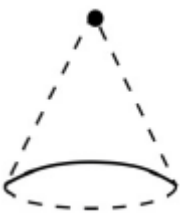



dikdörtgen
prizma



silindir



üçgen
prizma



koni




✚ Nesneleri ve özelliklerini eşleştiriniz.


1



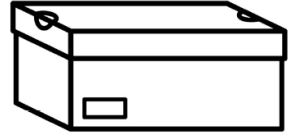
2



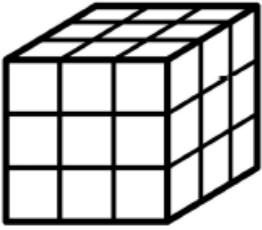
3



4




5



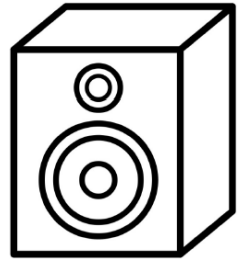
6



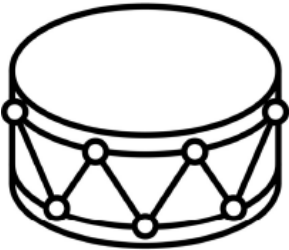
7




8




9



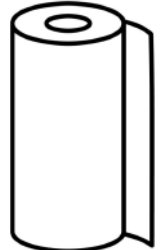
10



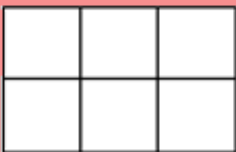
11



12



**KÖŞESİ VE DÜZ
YÜZÜ OLANLAR**



YUVARLANANLAR

