



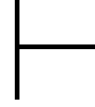
## UZUNLUK ÖLÇME

🌀 Aşağıda verilen uzunlukları santimetre olarak örnekteki gibi bulup yazalım.

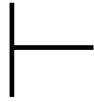
$$43 \text{ mm} = \text{4} \dots \text{cm} \text{ } \text{3} \dots \text{mm}$$

$$\begin{array}{r|l} 43 & 10 \\ -40 & \text{4 cm} \\ \hline 03 & \text{mm} \end{array}$$

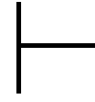
$$36 \text{ mm} = \dots \text{cm} \dots \text{mm}$$



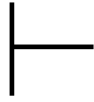
$$85 \text{ mm} = \dots \text{cm} \dots \text{mm}$$



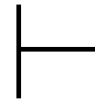
$$62 \text{ mm} = \dots \text{cm} \dots \text{mm}$$



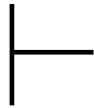
$$74 \text{ mm} = \dots \text{cm} \dots \text{mm}$$



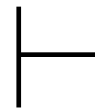
$$97 \text{ mm} = \dots \text{cm} \dots \text{mm}$$



$$243 \text{ mm} = \dots \text{cm} \dots \text{mm}$$



$$561 \text{ mm} = \dots \text{cm} \dots \text{mm}$$



$$729 \text{ mm} = \dots \text{cm} \dots \text{mm}$$



$$608 \text{ mm} = \dots \text{cm} \dots \text{mm}$$

