

GEOMETRİK ŞEKİLLER

1. Etkinlik : Aşağıdaki geometrik şekillerin adlarını , kenar ve köşe sayılarını yazalım.




Kenar sayısı:

Köşe sayısı:



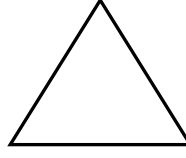
Kenar sayısı:

Köşe sayısı:



Kenar sayısı:

Köşe sayısı:



Kenar sayısı:

Köşe sayısı:

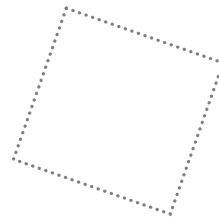
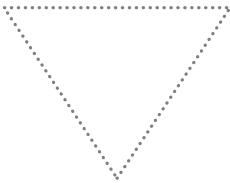
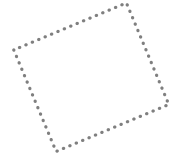
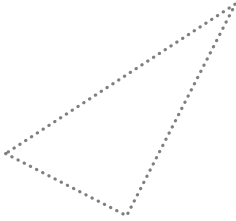
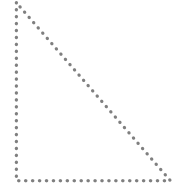


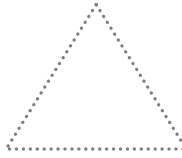
2. Etkinlik : Aşağıdaki geometrik şekilleri belirtilen renklerle çizelim. Şekillerin her birinden kaç tane olduğunu yazalım.

Üçgen → kırmızı

Çember → mavi

Dikdörtgen → kahverengi

Kare → yeşil



Üçgen →

Çember →

Dikdörtgen →

Kare →