

Adı :

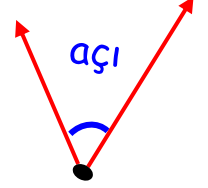
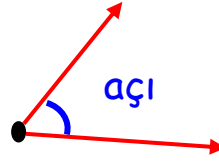
Soyadı:

3. Sınıf Matematik

Geometride Temel Kavramlar-3



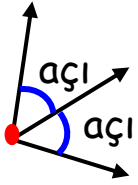
AÇI: Bir noktadan çıkan iki ışının arasındaki açıklığa **açı** denir.



Aşağıda verilen noktalardan 2'er tane farklı yönlere **ışın** çizerek **açı** oluşturunuz.



Aşağıda verilen noktalardan 3'er tane farklı yönlere **ışın** çizerek **açı** oluşturunuz.



Aşağıda verilen harflerde ve rakamlarda gördüğünüz **açıları** işaretleyiniz.

T V Y L K

N Z 1 7 M

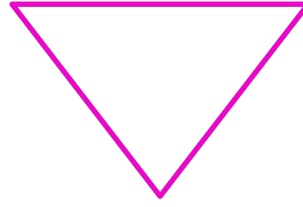
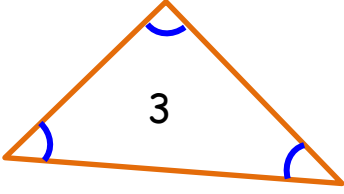
Adı :

Soyadı:

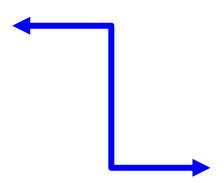



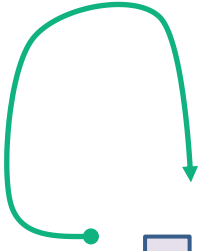
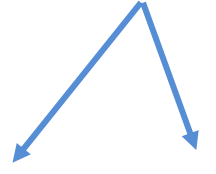
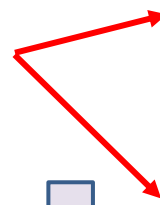
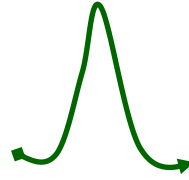
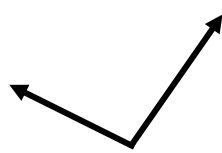
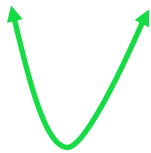

3. Sınıf
Matematik

Geometride Temel
Kavramlar-3

Kaç tane **açı** var? Açılırları gösteriniz.



Açıları işaretleyiniz.



Hangi varlıklarda **açı** vardır?

