

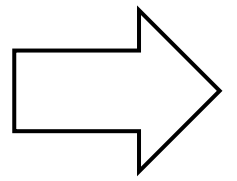
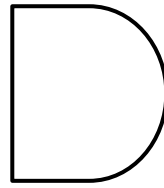
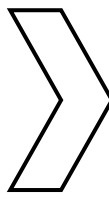
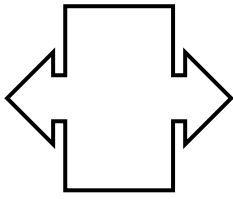
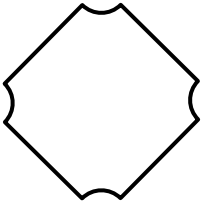
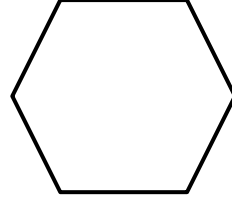
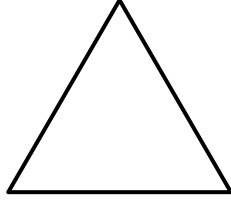
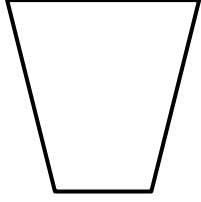
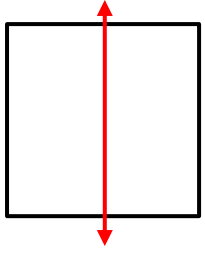
Adı : .....

Soyadı: .....


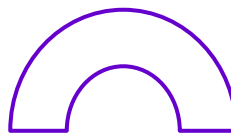


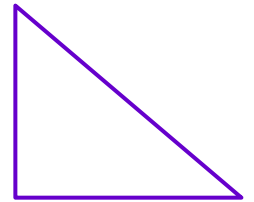




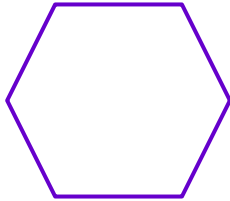
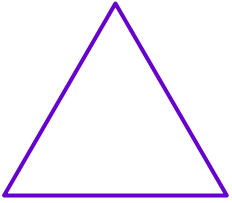
3. Sınıf  
Matematik

Uzamsal İlişkiler-2

Şekillerin **simetri doğrularını** çiziniz.



Şekillerin kaç tane **simetri doğrusu** olduğunu yazınız.



Adı : .....

Soyadı: .....

### 3. Sınıf Matematik

### Uzamsal İlişkiler-2

**Simetri doğrusuna** göre şekli tamamlayıp boyayınız.

