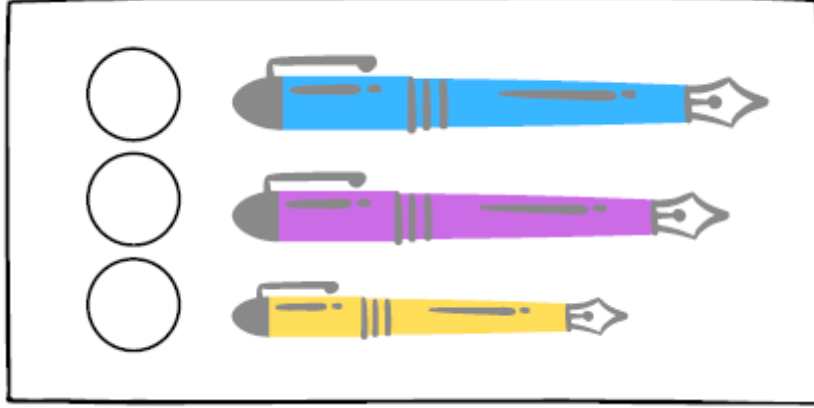


1. SINIF - UZUNLUKLARI KARŞILAŞTIRALIM ETKİNLİKLERİ - 2

En uzun pastel boyayı işaretleyiniz.



En kısa tükenmez kalemı işaretleyiniz.



Verilen kalemdeñ daha uzun ve daha kısa kalemler çiziniz.

Daha kısa bir kalem çiziniz →




A large, empty rectangular box with a dashed border, intended for drawing a shorter pencil.

Daha uzun bir kalem çiziniz →

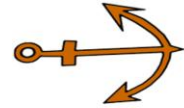
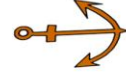
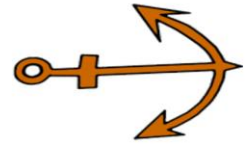
A large, empty rectangular box with a dashed border, intended for drawing a longer pencil.

Varlıkları uzundan kısaya doğru sıralayınız.

1






2



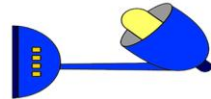
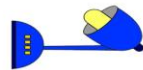
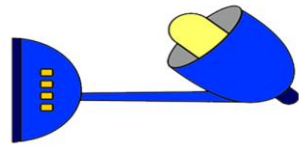
3



4



5



6

