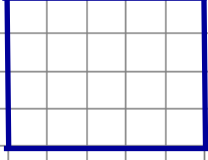




## ALAN ÖLÇME

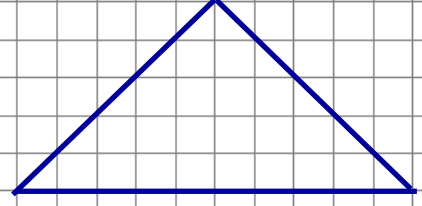
Aşağıdaki şekillerin alanlarının kaç birim kare olduğunu noktalı yerlere yazalım.

1.)



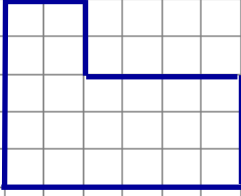
.....

5.)



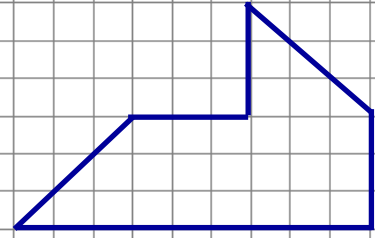
.....

2.)



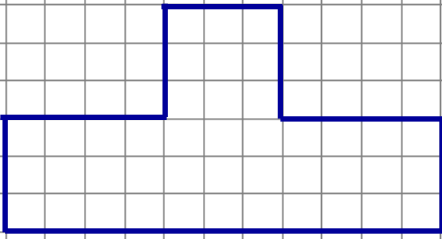
.....

6.)



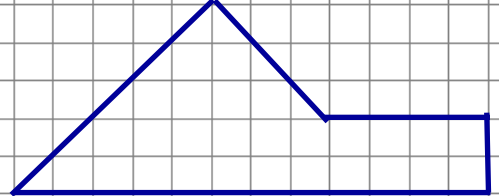
.....

3.)



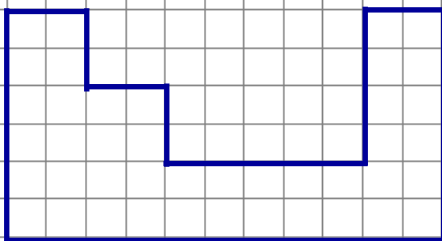
.....

7.)



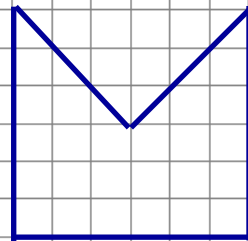
.....

4.)



.....

8.)



.....