



ALAN ÖLÇME

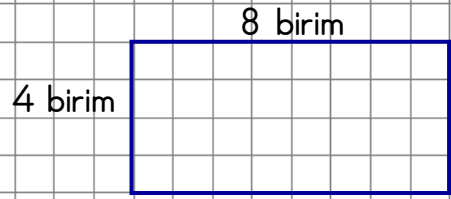
Aşağıdaki dikdörtgensel bölgelerin alanlarını işlem yaparak bulalım.

1.)

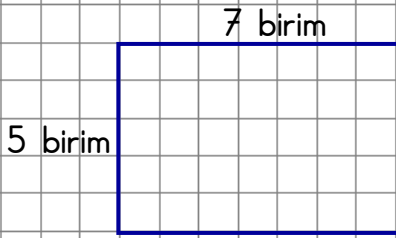


$$4 \times 6 = 24$$

5.)



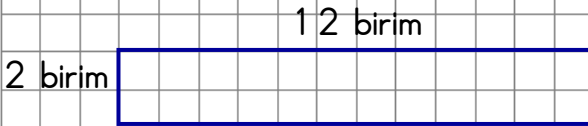
2.)



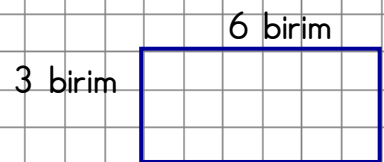
6.)



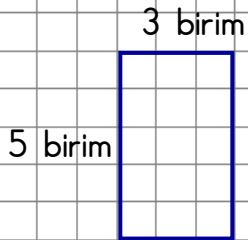
3.)



7.)



4.)



8.)

