

Adı :

Soyadı:

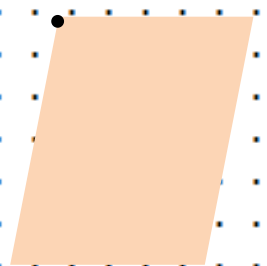
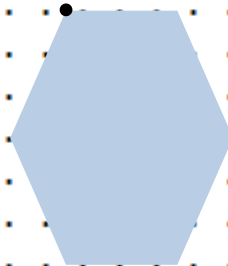








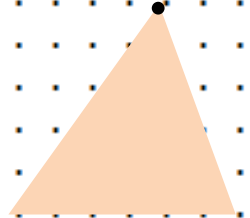



3. Sınıf
Matematik

Çevre Ölçme-1

Aşağıdaki nesnelerin çevresini örnekteki gibi çizin.



Aşağıdaki nesnelerin çevresini noktadan başlayarak çizin.



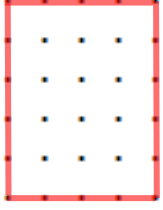
Adı :

Soyadı:

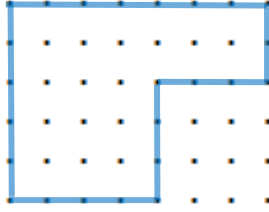
3. Sınıf
Matematik

Çevre Ölçme-1

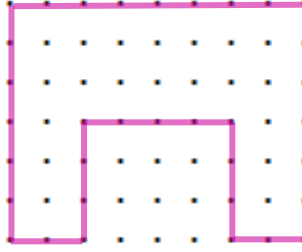
Aşağıdaki şekillerin çevrelerinin kaç birim olduğunu bulunuz.




Ç=.....birim



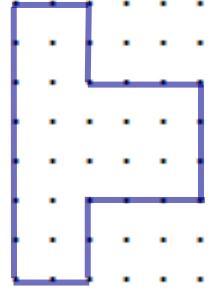
Ç=.....birim



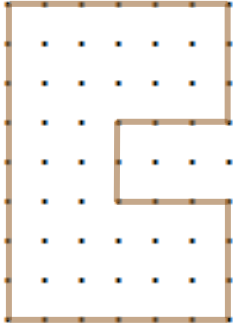
Ç=.....birim



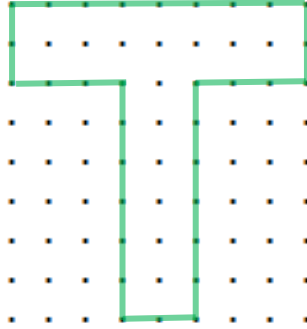
Ç=.....birim



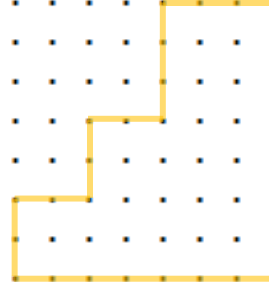
Ç=.....birim



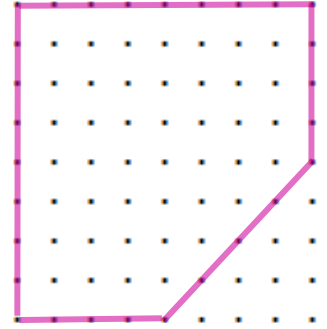
Ç=.....birim



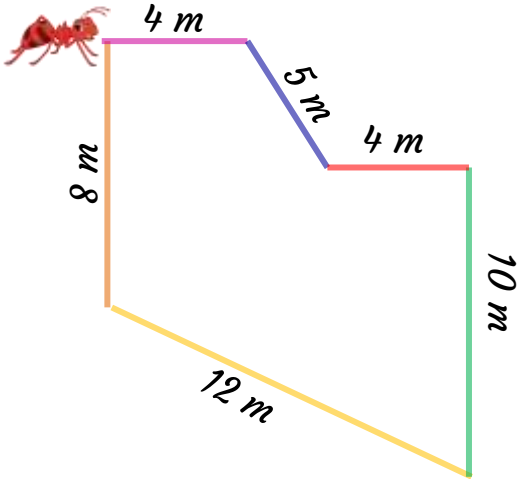
Ç=.....birim



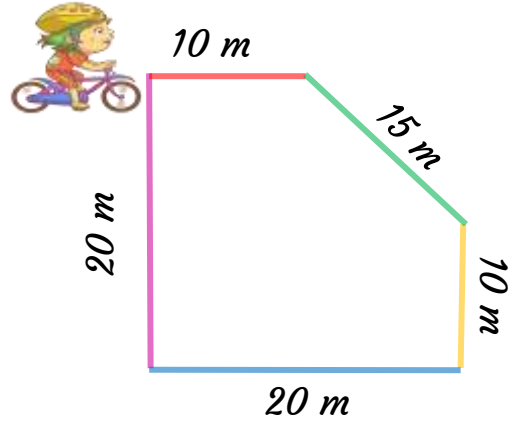
Ç=.....birim



Ç=.....birim



Karınca Zed, bulunduğu yerden başlayıp şeklin çevresini dolaşıp tekrar aynı yere geliyor. Karınca Zed ne kadar yol yürümüştür?



Deniz bisiklet yolunun çevresinde 1 tur atıyor. Ne kadar yol gitmiştir?