

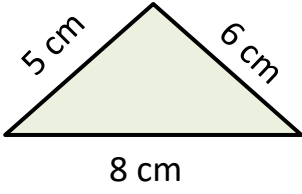
Adı :

Soyadı:

3. Sınıf Matematik

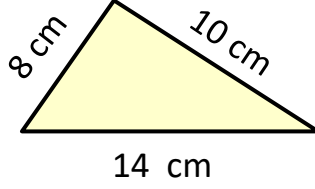
Çevre Ölçme-4

Aşağıdaki üçgenlerin çevresini hesaplayınız. (Gerçek ölçüler değildir.)

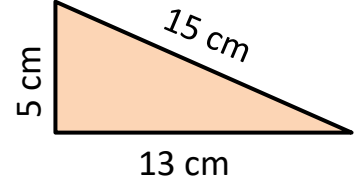


$$\text{Ç} = 5 + 6 + 8$$

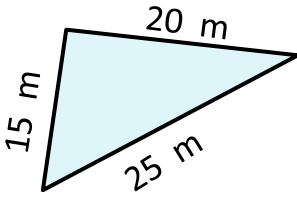
$$\text{Ç} = 19 \text{ cm}$$



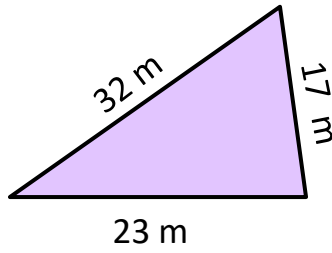
.....
.....



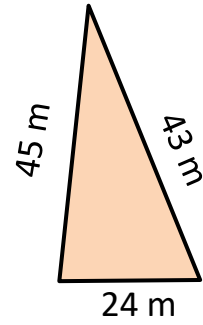
.....
.....



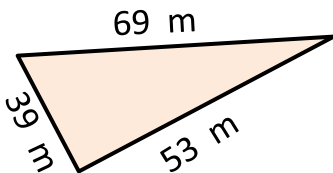
.....
.....



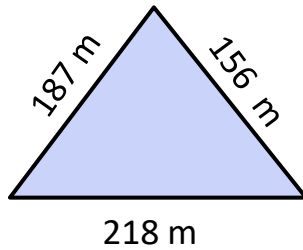
.....
.....



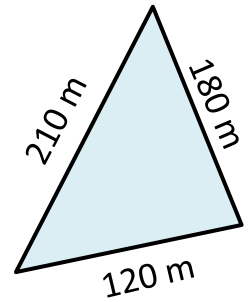
.....
.....



.....
.....



.....
.....



.....
.....

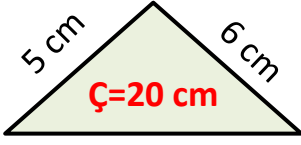
Adı :

Soyadı:

3. Sınıf Matematik

Çevre Ölçme-4

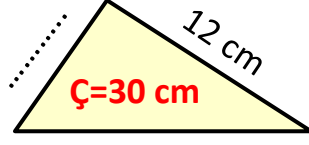
Çevresinin uzunluğu verilen üçgenlerin kenar uzunluklarını bulunuz.



.....

$$5 + 6 = 11$$

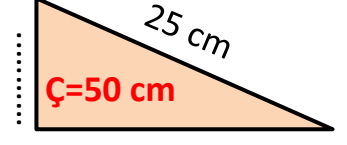
$$20 - 11 = 9$$



.....

.....

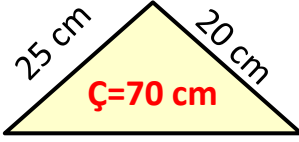
.....



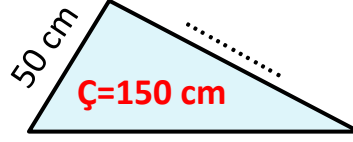
.....

.....

.....



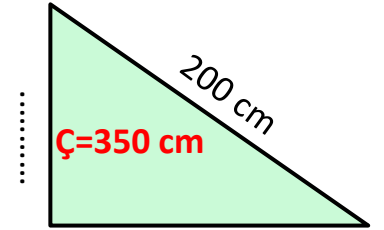
.....



.....

.....

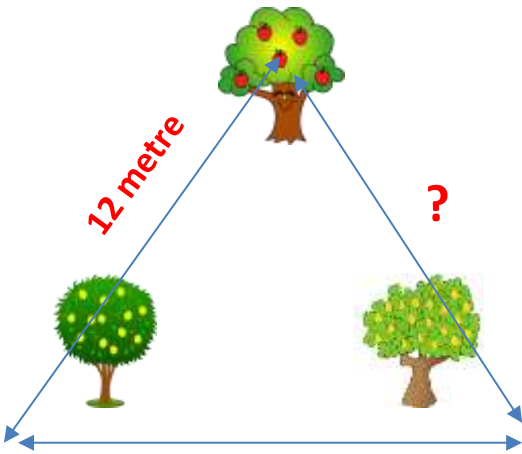
.....



.....

.....

.....



1- Yandaki ağaçların çevresine 3 sıra tel örgü çekilecektir. Bütün ağaçlar birbirine eşit uzaklıkta olduğuna göre ne kadar tel gerekir?

2- Elma ağacı ile limon ağacının arası 12 metredir. Limon ağacı portakal ağacı arasındaki uzaklık 24 metredir. Bu ağaçların çevresine 65 m tel kullanıldığına göre portakal ile elma ağacı arasındaki uzaklık ne kadardır?