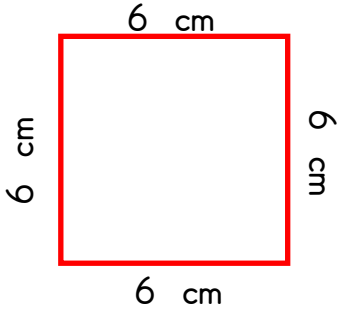


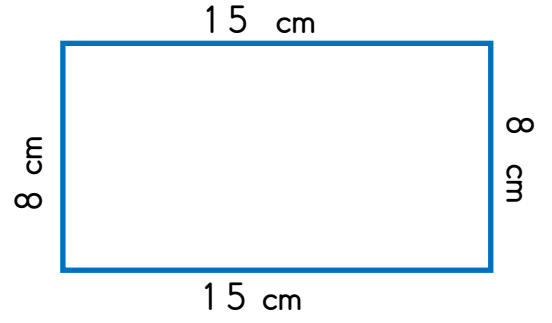


ŞEKİLLERİN ÇEVRE UZUNLUKLARI

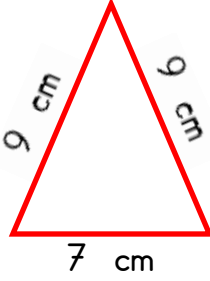
☞ Aşağıdaki geometrik şekilleri inceleyelim. Şekillerin çevre uzunluklarını bulup yazalım.



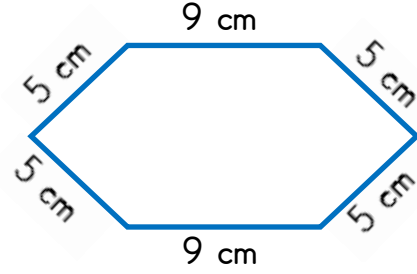
Karenin çevresi cm'dir.



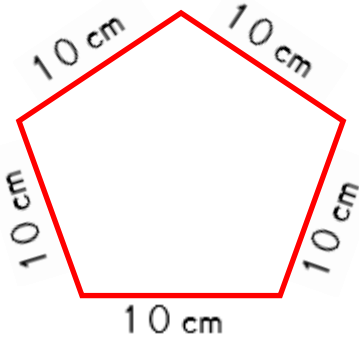
Dikdörtgenin çevresi cm'dir.



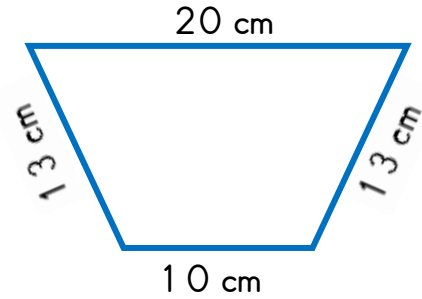
Üçgenin çevresi cm'dir.



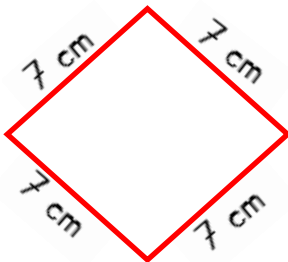
Altıgenin çevresi cm'dir.



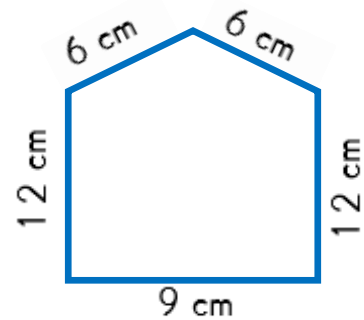

Beşgenin çevresi cm'dir.



Dörtgenin çevresi cm'dir.



Dörtgenin çevresi cm'dir.



Beşgenin çevresi cm'dir.