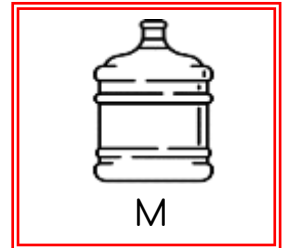
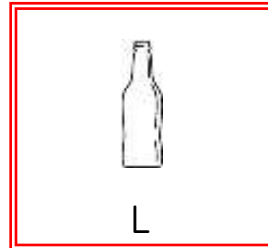

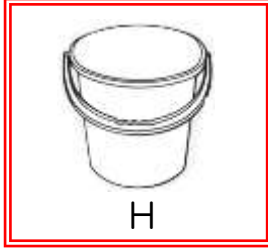
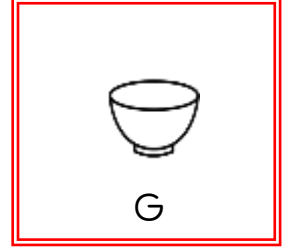
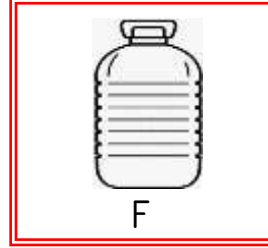
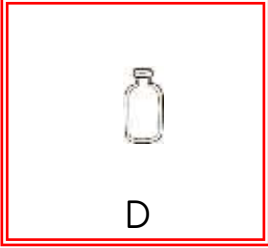
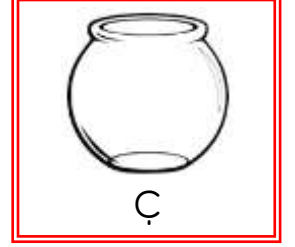
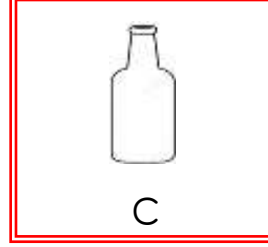
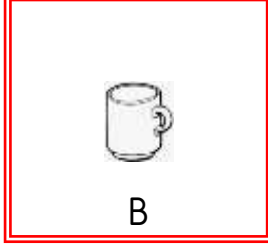
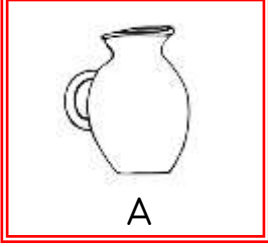




## SIVI ÖLÇME

☼ Aşağıdaki kapların ne kadar su alabileceğini düşünerek , harfleri ait olduğu tabloya yazalım.



Yarım Litreden Az

..... - ..... - .....

..... - .....

Yarım Litre

..... - ..... - .....

1 Litre

..... - ..... - .....

1 Litreden Fazla

..... - ..... - .....

..... - .....

