


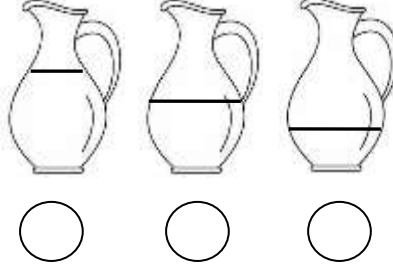
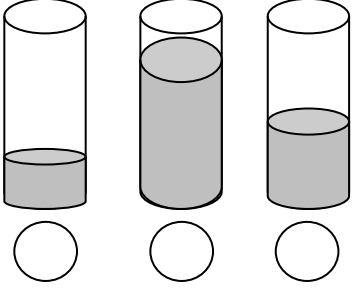


## SIVILARI ÖLÇME

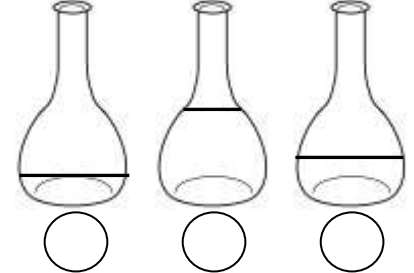
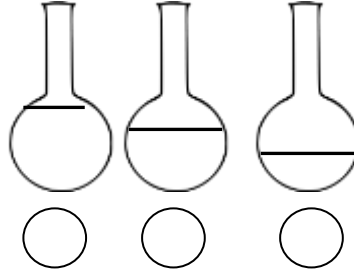
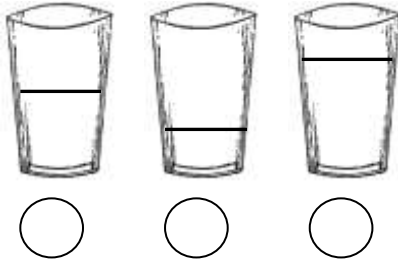


☆ Aşağıdaki soruları cevaplayalım.




İçinde daha az sıvı olanı işaretleyiniz.



İçinde daha fazla sıvı olanı işaretleyiniz.



Aşağıdaki eşyaları alacakları sıvı miktarına göre çoktan aza doğru sıralayınız.



Aşağıdaki eşyaları alacakları sıvı miktarına göre azdan çoğa doğru sıralayınız.

