



DESTE VE DÜZİNE


➤ Aşağıda verilen varlık ve nesnelere sayalım. Sayılarına karşılık gelen "deste" veya "düzine" kelimelerini yazalım.



.....




.....




.....




.....




.....




.....




.....



.....




.....



.....



.....



.....