





Verilen sayıların önündeki ve arkasındaki yüzlükleri yazınız.



Verilen sayıların, sayı doğrusu üzerinde hangi yüzlükler arasında olduğunu gösterin.

3445



6079



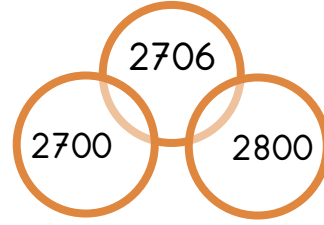
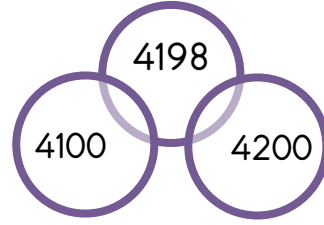
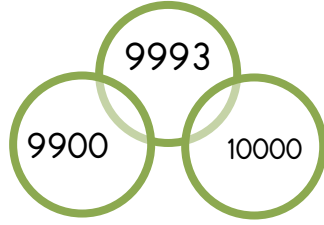
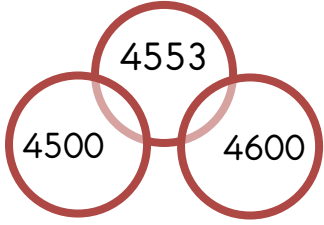
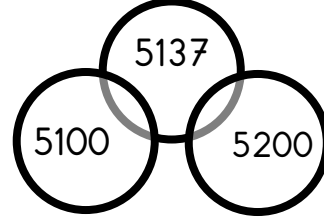
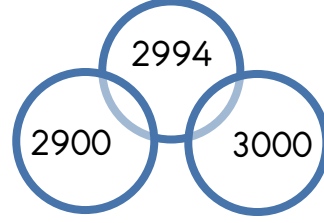
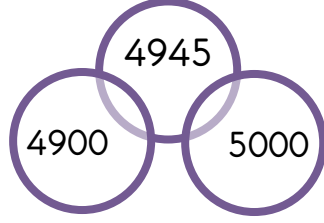
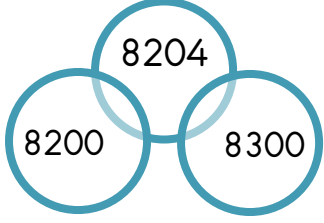
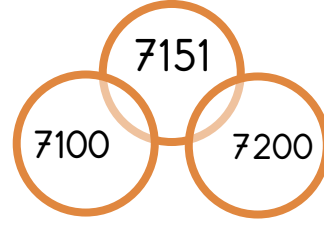
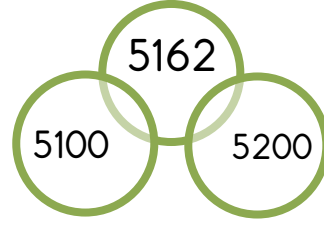
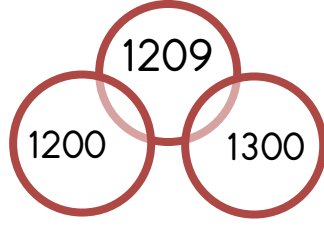
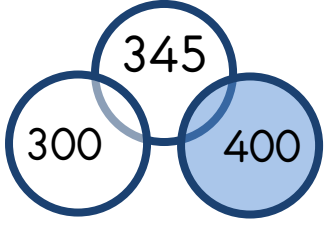
1551



8993



Verilen sayıları en yakın yüzlüğe yuvarlanmış halini örnekteki gibi boyayınız.



Aşağıda verilen sayıları en yakın yüzlüğe yuvarlayın.

5642 → 5600

8945 → .....

1023 → .....

9934 → .....

7471 → .....

8005 → .....

9618 → .....

6336 → .....

9161 → .....

1096 → .....

2142 → .....

5550 → .....

7655 → .....

4998 → .....

6439 → .....

8250 → .....

9109 → .....

5927 → .....

3373 → .....

1259 → .....

9995 → .....