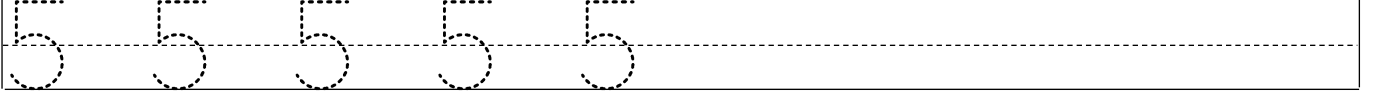



# Rakamlar Etkinliđi – 5

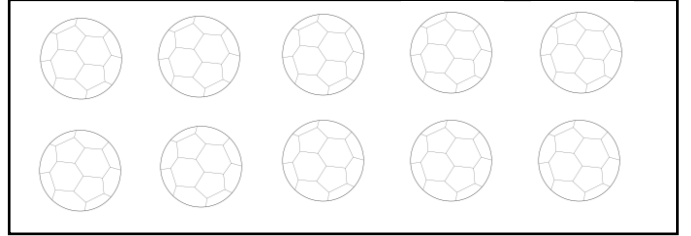
• Adı Soyadı:.....



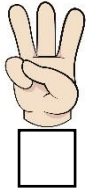
Aşağıdaki boşluđa beş varlık çizdirin.



Toplardan beş tanesini boyatın.



Beş sayısını gösteren parmađı işaretletin.



Akvaryuma beş balık çizdirin.

