




1. SINIF TOPLAMA İŞLEMİ

Aşağıda verilen toplamaları yapın.


@gunes_ogretmenle_etkinlikler




$2+0=$




$3+2=$




$8+0=$




$6+2=$




$7+1=$




$3+1=$




$5+0=$




$3+4=$




$5+3=$




$5+2=$




$5+5=$




$3+4=$




$2+4=$




$4+4=$




$1+3=$




$3+1=$




$2+6=$




$3+4=$



$4+6=$



$1+2=$



$2+6=$

