

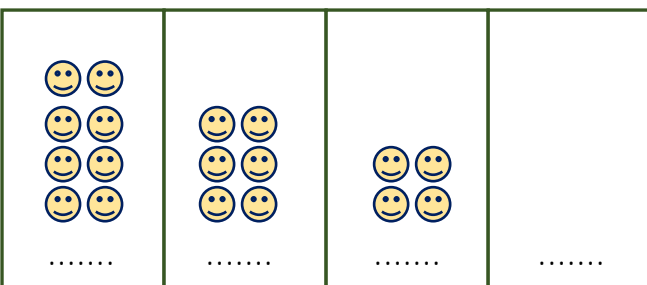
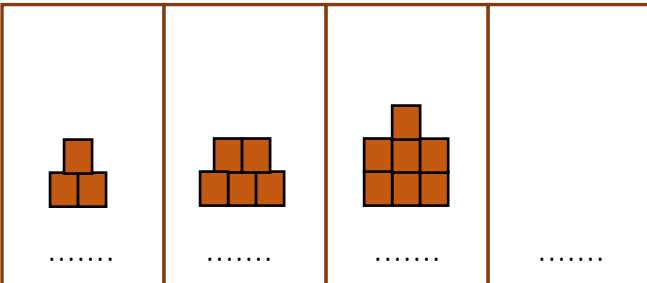
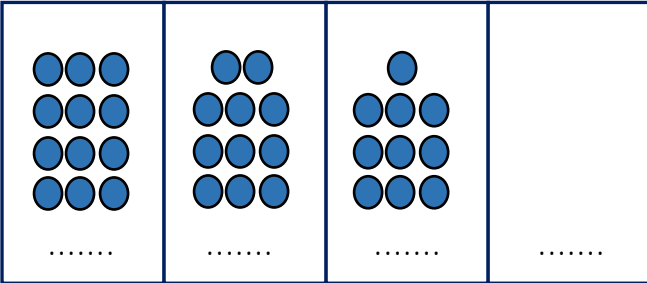
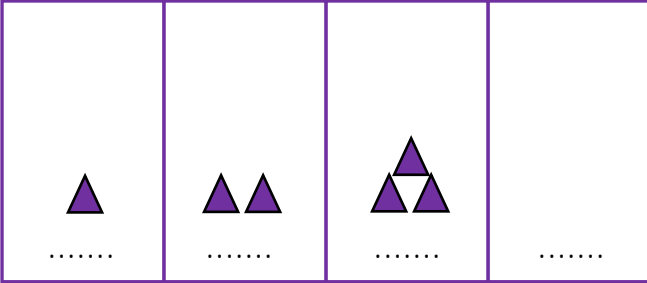



Adı Soyadı :

Numarası :

Konu: Sayı Örüntüleri 3

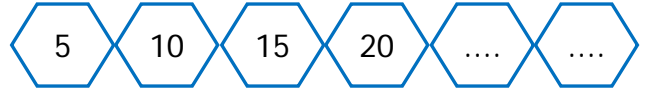
Aşağıda verilen sayı örüntülerini modelleyerek birer adım ilerletelim.



Aşağıdaki örüntünün kuralını belirleyip bir sonraki adımda yazılması gereken sayıyı yazalım.



Kural:



Kural:



Kural:



Kural:



Kural:

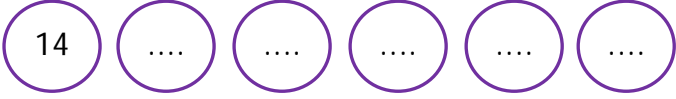


Kural:

Aşağıda verilen sayılardan başlayarak kuralına uygun olarak örüntüyü devam ettiriniz.



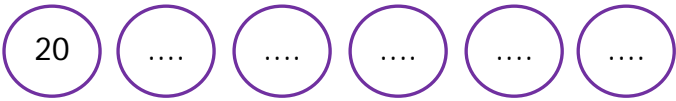
Kural: 2 artan



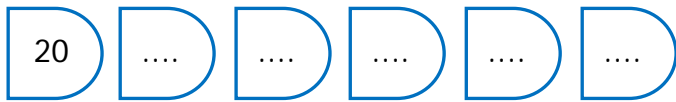
Kural: 2 azalan



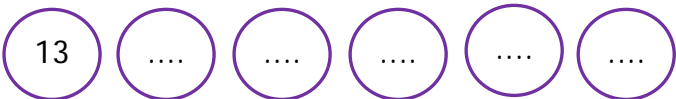
Kural: 5 artan



Kural: 1 azalan



Kural: 10 artan



Kural: 2 azalan



Kural: 5 azalan

Aşağıdaki örüntülerde noktalı yerlere uygun sayıları yazınız.

