




Adı Soyadı :

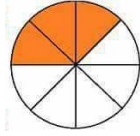
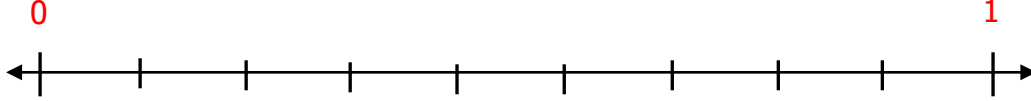
Numarası :

Konu: Kesirleri Sayı Doğrusunda Gösterme

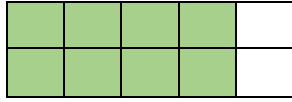
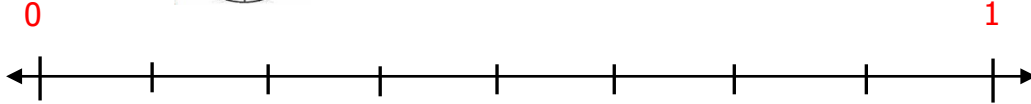
Aşağıdaki şekillerin boyalı kısımlarının ifade ettiği kesirleri yazarak sayı doğrusunda gösteriniz.



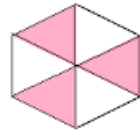
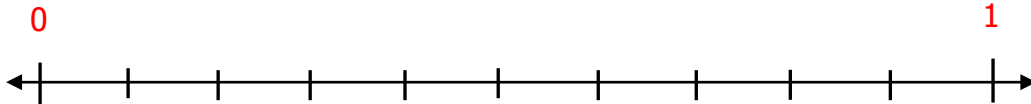
.....



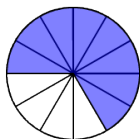
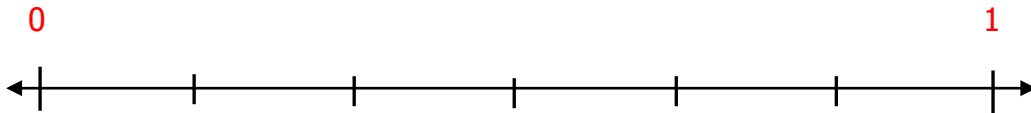
.....



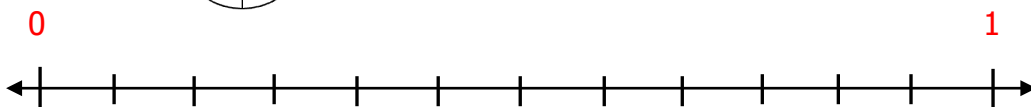
.....



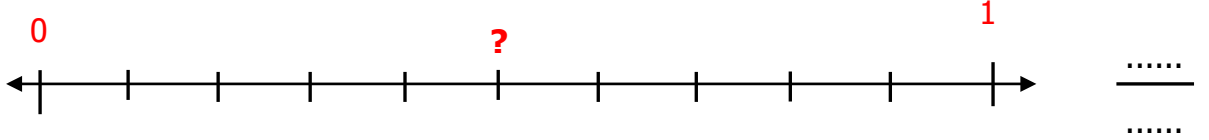
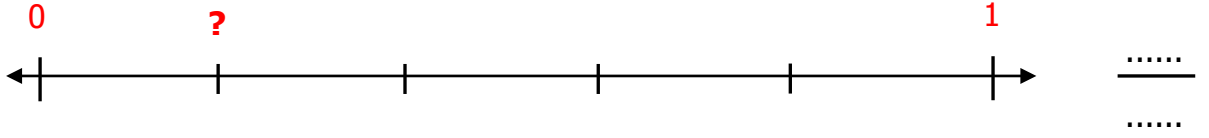
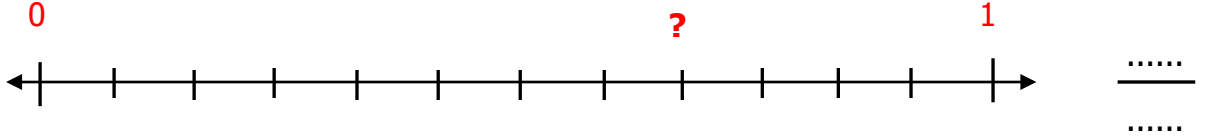
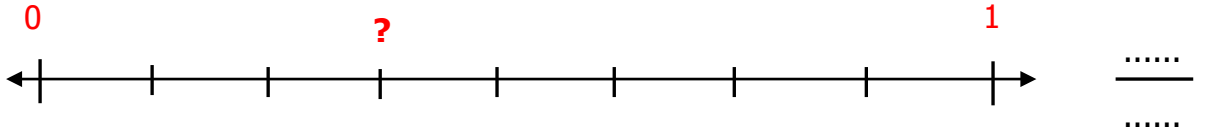
.....




.....



Aşağıdaki sayı doğrularında soru işareti ile (?) gösterilen kesirleri yazınız.



Aşağıda görsellerde belirtilen birçokluğun birim kesir kadarını bulalım.



12 tane yumurtanın $\frac{1'}{3}$ i ile annem pasta yaptı. Annem pasta yapmak için kaç tane yumurta kullanmıştır?



Mert'in 20 tane misketi var. Misketlerinin $\frac{1'}{5}$ ini arkadaşına verdi. Mert, arkadaşına kaç tane bilye vermiştir?



Murat, 72 sayfa kitabın $\frac{1'}{9}$ ini okuduğuna göre kaç sayfa kitap okumuştur?