



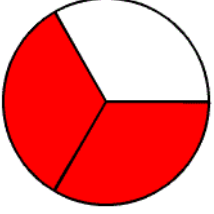
Adı Soyadı :

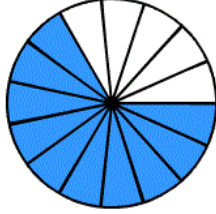
Numarası :

Konu: Bir Çokluğun Belirtilen Birim Kesir Kadarını Bulma

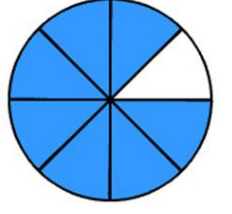
Kesirler

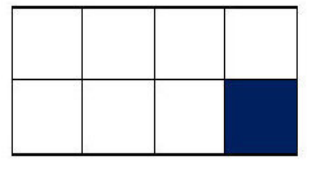
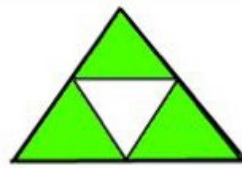
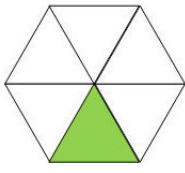
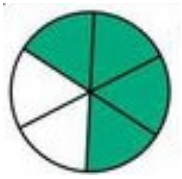
Aşağıda verilen şekillerin boyalı kısımlarını kesir olarak ifade edelim.



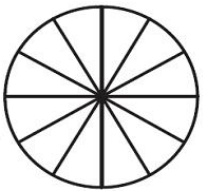
$$\frac{\dots\dots}{\dots\dots}$$


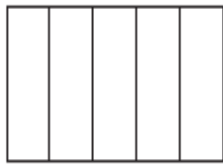
$$\frac{\dots\dots}{\dots\dots}$$

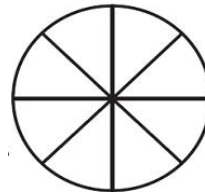

$$\frac{\dots\dots}{\dots\dots}$$


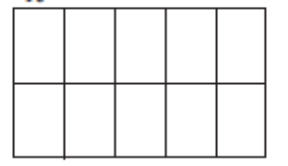
$$\frac{\dots\dots}{\dots\dots}$$
Aşağıdaki şekillerden hangilerinin boyalı kısımları birim kesri ifade etmektedir?

Aşağıdaki şekillerin verilen kesir kadarını boyayalım.



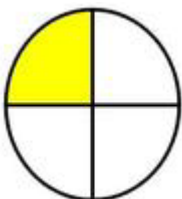
$$\frac{10}{12}$$


$$\frac{2}{5}$$


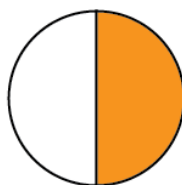
$$\frac{3}{8}$$


$$\frac{8}{10}$$


Aşağıdaki şekillerin altına bütün, yarım ve çeyrek yazınız.



.....



.....



.....

Aşağıdaki kesirlerin okunuşlarını ve birim kesirlerini karşlarına yazınız.

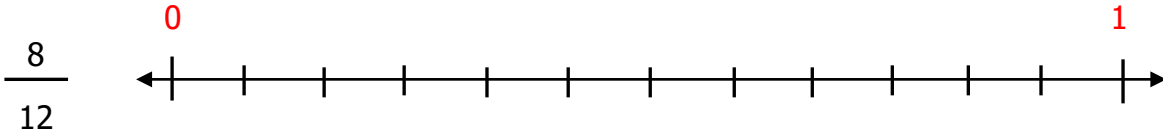
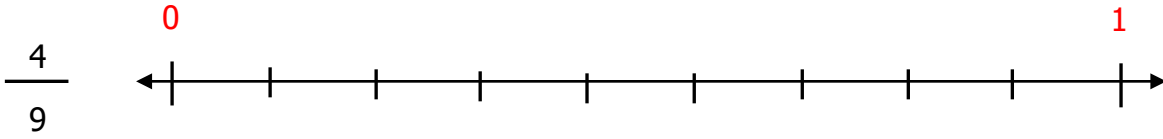
$$\frac{3}{8} : \dots\dots\dots \frac{\dots\dots}{\dots\dots}$$

$$\frac{6}{10} : \dots\dots\dots \frac{\dots\dots}{\dots\dots}$$

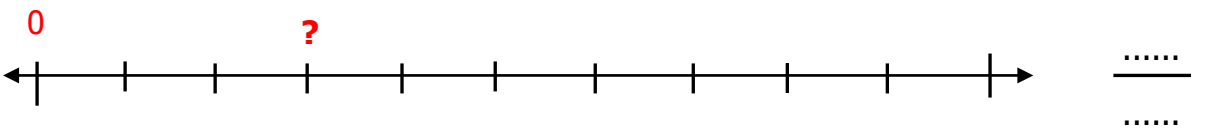
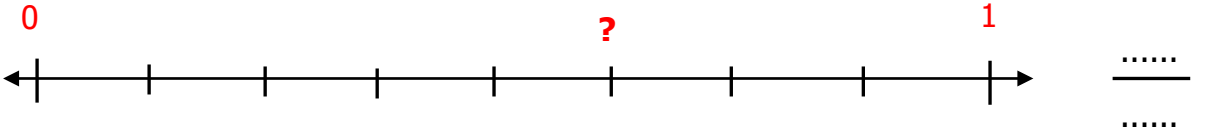
$$\frac{9}{20} : \dots\dots\dots \frac{\dots\dots}{\dots\dots}$$

$$\frac{5}{15} : \dots\dots\dots \frac{\dots\dots}{\dots\dots}$$

Aşağıdaki kesirleri sayı doğrusunda gösteriniz.



Aşağıdaki sayı doğrularında soru işareti ile (?) gösterilen kesirleri yazınız.



Problemler



Sınıfımızdaki 36 öğrencinin $\frac{1}{3}$ i kız öğrencidir. Buna göre sınıfımızda kaç kız öğrenci vardır?



Bir kolideki 30 yumurtanın $\frac{1}{6}$ i kırılıyor. Buna göre kırılan yumurtaların sayısı kaçtır?