

Verilen kesirlerin şekillerini çizin. Altlarına okunuşlarını yazın.

$$\frac{6}{4}$$

$$\frac{8}{5}$$

$$\frac{7}{3}$$

$$\frac{7}{4}$$

$$\frac{4}{3}$$

$$\frac{5}{2}$$

$$\frac{3}{2}$$

$$\frac{7}{5}$$

$$\frac{5}{3}$$

$$\frac{9}{4}$$

$$\frac{9}{5}$$

$$\frac{9}{7}$$

$$\frac{10}{4}$$

$$\frac{11}{5}$$

$$\frac{8}{3}$$

$$\frac{9}{2}$$

$$\frac{4}{2}$$

$$\frac{11}{6}$$

$$\frac{11}{4}$$

$$\frac{12}{5}$$

$$\frac{8}{7}$$

$$\frac{5}{2}$$

$$\frac{9}{3}$$

$$\frac{8}{4}$$

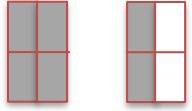
Verilen şekillerin kesirlerini ve okunuşlarını yazın.

Kesrin yazılışı	Kesrin okunuşu
-----------------	----------------

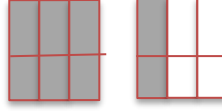
$\frac{3}{2}$	İkide üç üç bölü iki
---------------	-------------------------

Kesrin yazılışı	Kesrin okunuşu
-----------------	----------------


--	--



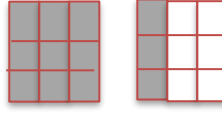
--	--



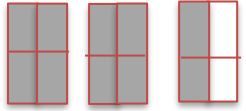
--	--



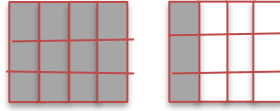
--	--



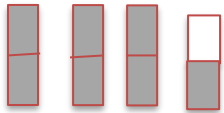
--	--



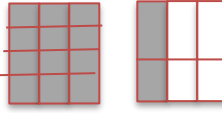
--	--



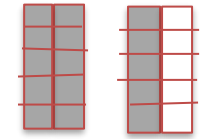
--	--



--	--



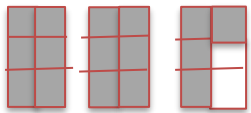
--	--



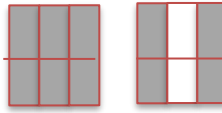
--	--



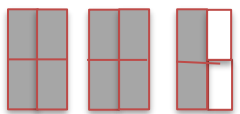
--	--



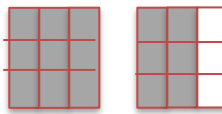
--	--



--	--



--	--



--	--