

1. Aşağıda verilen kesirlerin şeklini çizin.

$\frac{1}{8}$

$\frac{2}{6}$



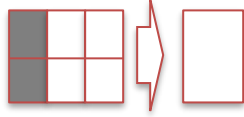

$\frac{7}{6}$

$\frac{9}{5}$

$1\frac{1}{8}$

$1\frac{6}{7}$

2. Şekli verilen kesirleri altlarına yazın.



3. Verilen kesirlerin okunuşlarını karşlarına yazın.

$\frac{2}{4}$

$\frac{6}{7}$

$\frac{9}{6}$

$\frac{7}{5}$

$1\frac{1}{8}$

$2\frac{5}{6}$

4. Okunuşları verilen kesirleri yazın

İki bölü üç

Dokuzda beş

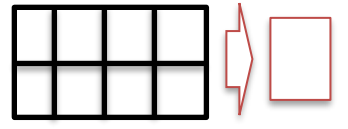

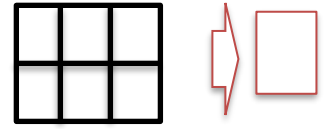
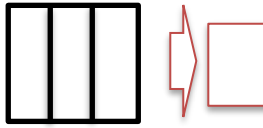

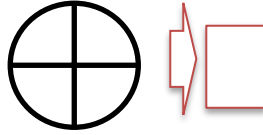
Beşte iki

On bölü dört

Üç tam üçte bir

İki tam altıda iki

5. Kesirlerin birim kesirlerini boyayıp yazın.



6. Verilen kesirleri sayı doğrusunda gösterin.

$\frac{2}{4}$



$\frac{3}{5}$



$\frac{7}{6}$



$\frac{8}{5}$

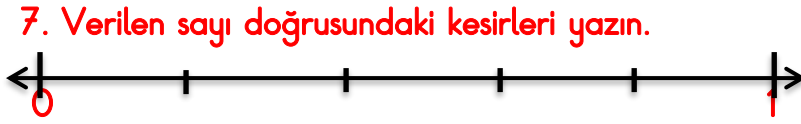


$1\frac{1}{5}$




$2\frac{1}{3}$





720 TL paramın $\frac{4}{6}$ ' sı ile kitap aldım. Kitap kaç TL'dir?



190 sayfa kitabımın $\frac{2}{5}$ ' ini okudum. Kaç sayfam kaldı?



9. Verilen kesirleri karşılaştırın.

$\frac{1}{8} \dots\dots\dots \frac{4}{8}$ $\frac{3}{9} \dots\dots\dots \frac{2}{9}$ $\frac{5}{6} \dots\dots\dots \frac{4}{6}$
 $\frac{1}{8} \dots\dots\dots \frac{1}{6}$ $\frac{1}{7} \dots\dots\dots \frac{1}{9}$ $\frac{1}{5} \dots\dots\dots \frac{1}{2}$

8. Verilen soruları çözün.
640 sayısının $\frac{4}{6}$ ' sı kaç eder?

10. Verilen kesirleri büyükten küçüğe sıralayın.

$\frac{1}{5}, \frac{1}{9}, \frac{1}{4}, \frac{1}{2} =$
 $\frac{7}{9}, \frac{4}{9}, \frac{6}{9}, \frac{5}{9} =$

950 sayısının $\frac{3}{5}$ ' i kaç eder?

11. Verilen kesirleri küçükten büyüğe sıralayın.

$\frac{1}{5}, \frac{1}{9}, \frac{1}{4}, \frac{1}{2} =$
 $\frac{7}{9}, \frac{4}{9}, \frac{6}{9}, \frac{5}{9} =$