

Verilen kesirlerin türünü işaretleyin.(4)

$\frac{3}{6}$

 Basit Kesir Bileşik Kesir Tam sayılı Kesir

$\frac{8}{5}$

 Basit Kesir Bileşik Kesir Tam Sayılı Kesir

$\frac{9}{6}$

 Basit Kesir Bileşik Kesir Tam sayılı Kesir

$1\frac{3}{5}$

 Basit Kesir Bileşik Kesir Tam Sayılı Kesir

Verilen kesirlerin okunuşlarını yazın.(9)

$\frac{2}{5}$

$\frac{4}{9}$

$\frac{6}{11}$

$\frac{8}{6}$

$\frac{7}{3}$

$\frac{3}{2}$

$1\frac{1}{6}$

$2\frac{4}{7}$

$3\frac{3}{4}$

Okunuşları verilen kesirleri yazın.(9)

beşte altı

üç bölü sekiz

iki tam dörtte iki

üçte dokuz

bir tam iki bölü üç

onda yedi

sekiz bölü altı

üç tam dörtte bir

yedide dokuz

Verilen kesirlerin şekillerini çiziniz.(18)

$\frac{3}{8}$

$\frac{5}{3}$

$1\frac{3}{4}$

$\frac{2}{6}$

$\frac{9}{4}$

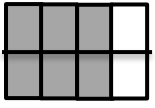
$2\frac{1}{3}$

$\frac{1}{4}$

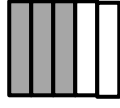
$\frac{7}{2}$

$1\frac{4}{6}$

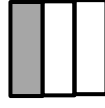
Verilen şekillerin kesirlerini yazın.(12)



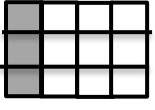
—






—




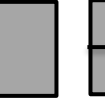
—



—



—



—

Verilen kesirleri sayı doğrusunda gösterin.(12)

$\frac{9}{4}$



$\frac{3}{8}$



$2\frac{2}{5}$

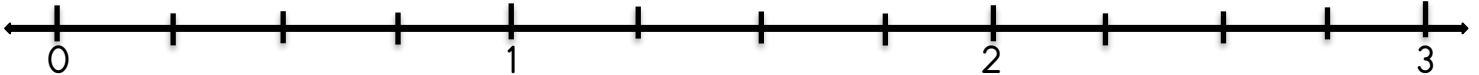


Sayı doğrusunda gösterilen kesirleri yazın.(14)



—

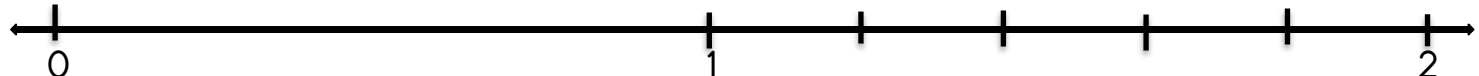
—



—

—

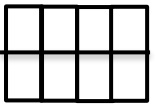
—



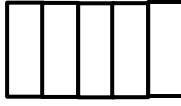
—

—

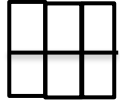
Verilen şekillerdeki birim kesirleri boyayıp yanlarına yazın.(10)



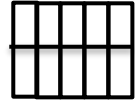
—



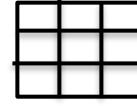
—



—



—



—

Verilen birim kesirleri karşılaştırın.(6)

$$\frac{1}{8} \dots\dots \frac{1}{5}$$

$$\frac{1}{4} \dots\dots \frac{1}{7}$$

Verilen birim kesirleri sıralayın(6)

Büyükten küçüğe

$$\frac{1}{4}, \frac{1}{7}, \frac{1}{2}, \frac{1}{6}$$

Küçükten büyüğe

$$\frac{1}{3}, \frac{1}{8}, \frac{1}{5}, \frac{1}{7}$$