



Verilen kesirleri sayı doğrusunda gösteriniz.


$$\frac{2}{3}$$




$$\frac{2}{4}$$



$$\frac{3}{5}$$



$$\frac{4}{6}$$




$$\frac{4}{7}$$




$$\frac{5}{8}$$




$$\frac{5}{3}$$




$$\frac{7}{4}$$




$$\frac{9}{5}$$




$$\frac{10}{4}$$



$$\frac{10}{3}$$



$$\frac{5}{4}$$



$$1\frac{2}{3}$$



$$2\frac{2}{4}$$



Verilen sayı doğrusundaki kesirleri yazınız.

