

Verilen kesirlerin şekillerini çizin. Altlarına okunuşlarını yazın.

$1\frac{2}{4}$

$2\frac{2}{5}$

$2\frac{1}{3}$

$2\frac{3}{4}$

$2\frac{2}{3}$

$1\frac{5}{8}$

$2\frac{3}{6}$

$3\frac{4}{5}$

$1\frac{5}{7}$

$1\frac{1}{4}$

$2\frac{1}{5}$

$2\frac{6}{7}$

$1\frac{5}{6}$

$3\frac{2}{5}$

$2\frac{4}{6}$

$2\frac{2}{8}$

$2\frac{4}{7}$

$3\frac{1}{6}$

$3\frac{2}{8}$

$3\frac{1}{5}$

$1\frac{6}{7}$

$3\frac{5}{8}$


$1\frac{2}{9}$

$3\frac{3}{4}$

Verilen şekillerin kesirlerini ve okunuşlarını yazın.

Kesrin yazılışı	Kesrin okunuşu
-----------------	----------------

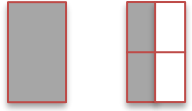
Kesrin yazılışı	Kesrin okunuşu
-----------------	----------------



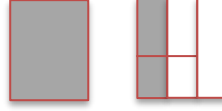
$1\frac{1}{2}$	Bir tam ikide bir Bir tam bir bölü iki
----------------	---



--	--



--	--



--	--



--	--



--	--



--	--



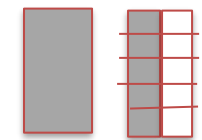
--	--



--	--



--	--



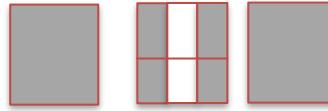
--	--



--	--




--	--



--	--



--	--



--	--