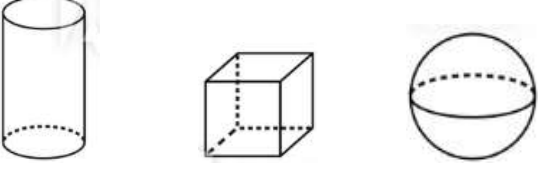


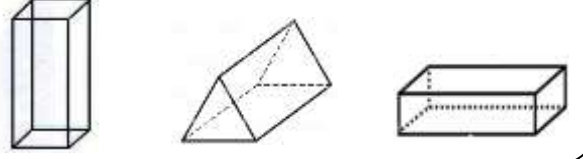
GEOMETRİK CİSİMLER

1.Etkinlik: Soruları cevaplayınız . Doğru cevabı boyayınız.

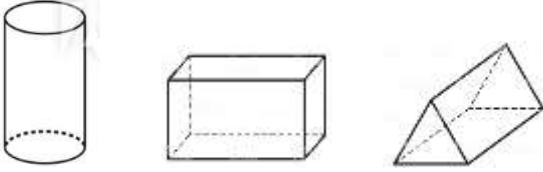
Hangisinin yüzü eğri değildir?



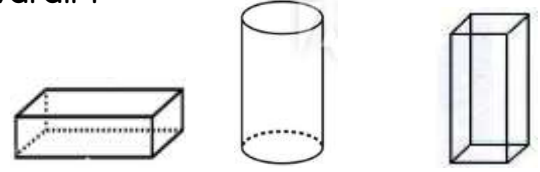
Hangisinin 2 yüzü karedir?



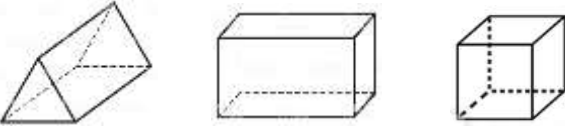
Hangisinin yüzüyle üçgen çizilebilir?



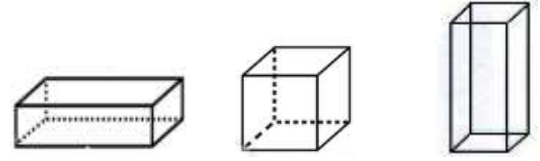
Hangisinin yüzünde 2 tane daire vardır?



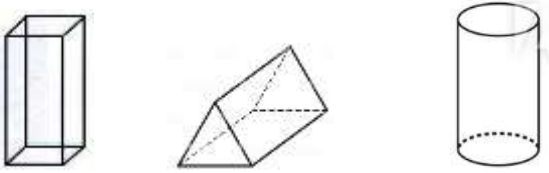
Hangisinin köşe sayısı diğerlerinden azdır?



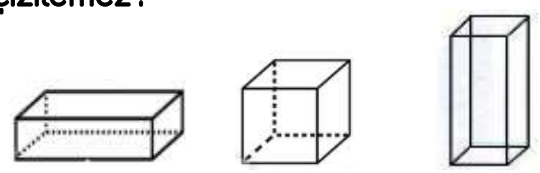
Hangisinin tüm yüzleri karedir?



Hangisinin yüzü ile çember çizilebilir?



Hangisinin yüzlerinden biri ile kare çizilemez?



Hangisinde 1 yüz vardır?



Hangisinin yüzlerinden biri ile dikdörtgen çizilemez?

