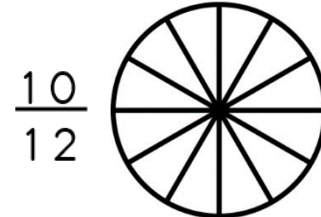
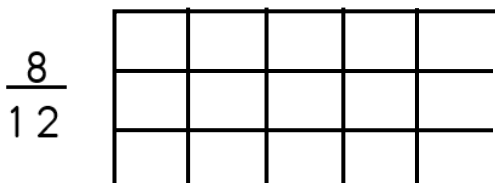
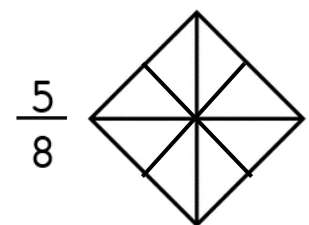
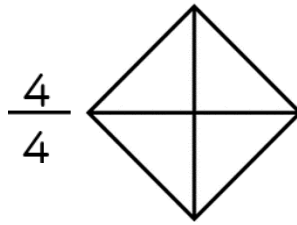
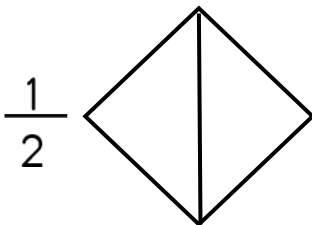
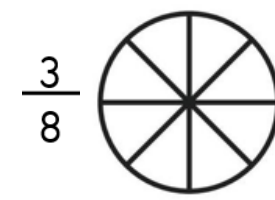
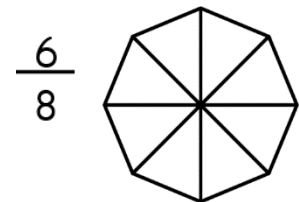
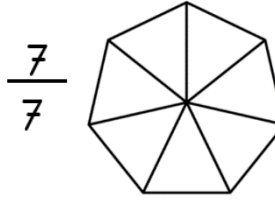
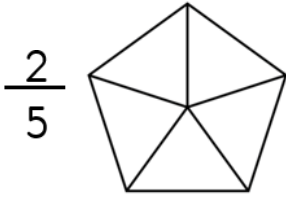
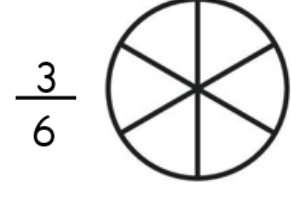
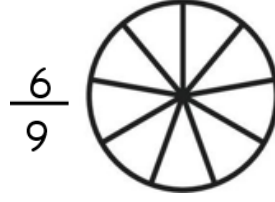
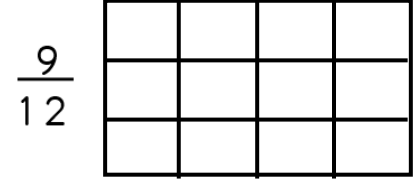
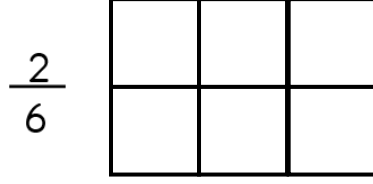
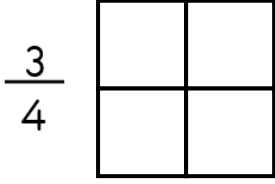




## KESİRLER

☼ Aşağıdaki şekillerin ifade ettiği kesirleri ve okunuşlarını yazalım.

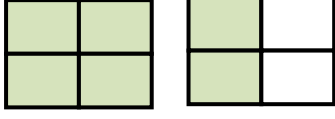




## KESİRLER

☼ Aşağıdaki kesir sayılarını örnekteki gibi şekil üzerinde gösteriniz.

$$\frac{6}{4}$$



$$\frac{5}{3}$$


$$\frac{7}{4}$$

$$\frac{10}{6}$$

$$\frac{8}{5}$$

$$\frac{10}{4}$$

$$2 \frac{4}{6}$$



$$3 \frac{1}{2}$$

$$2 \frac{2}{3}$$

$$1 \frac{3}{4}$$

$$1 \frac{2}{6}$$

$$1 \frac{3}{5}$$