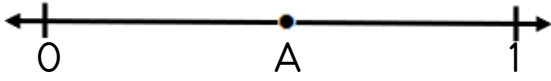





KESİRLER

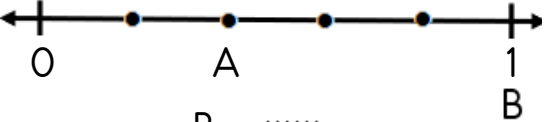
☼ Aşağıda sayı doğrularında harflerle belirtilen kesirleri yazalım.



$$A = \frac{\dots}{\dots}$$



$$A = \frac{\dots}{\dots} \quad B = \frac{\dots}{\dots}$$



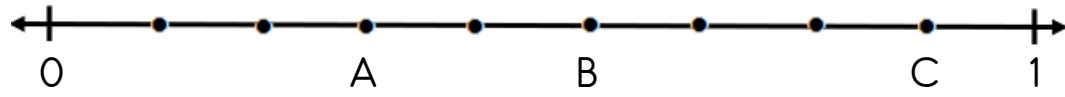
$$A = \frac{\dots}{\dots} \quad B = \frac{\dots}{\dots}$$



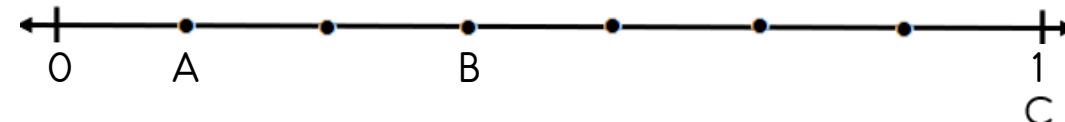
$$A = \frac{\dots}{\dots} \quad B = \frac{\dots}{\dots}$$



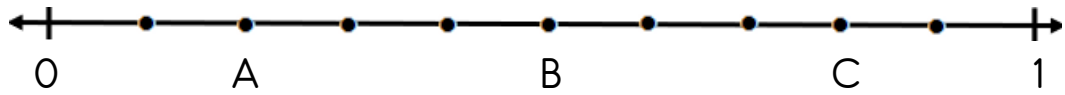
$$A = \frac{\dots}{\dots} \quad B = \frac{\dots}{\dots} \quad C = \frac{\dots}{\dots}$$



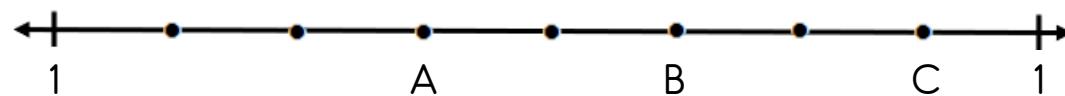
$$A = \frac{\dots}{\dots} \quad B = \frac{\dots}{\dots} \quad C = \frac{\dots}{\dots}$$



$$A = \frac{\dots}{\dots} \quad B = \frac{\dots}{\dots} \quad C = \frac{\dots}{\dots}$$



$$A = \frac{\dots}{\dots} \quad B = \frac{\dots}{\dots} \quad C = \frac{\dots}{\dots}$$



$$A = \frac{\dots}{\dots} \quad B = \frac{\dots}{\dots} \quad C = \frac{\dots}{\dots}$$



KESİRLER

☞ Aşağıdaki kesir sayılarını örnekteki gibi sayı doğrusunda gösteriniz.

