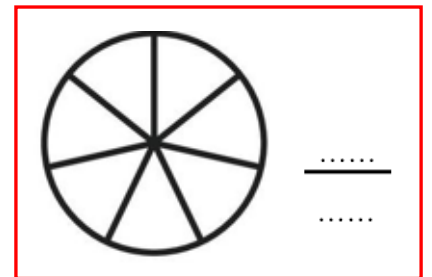
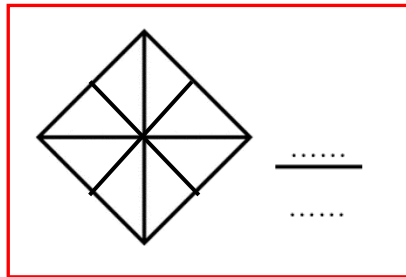
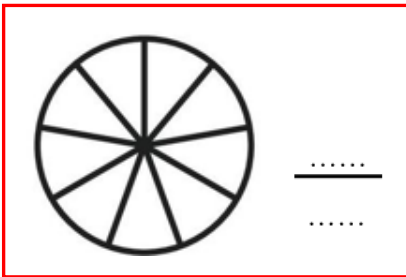
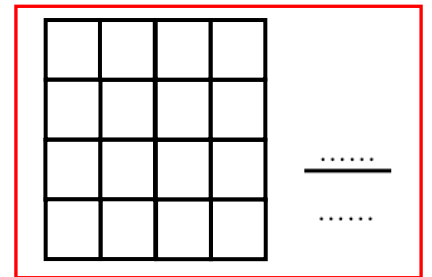
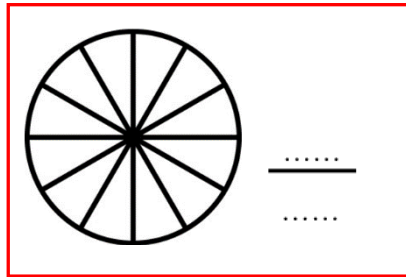
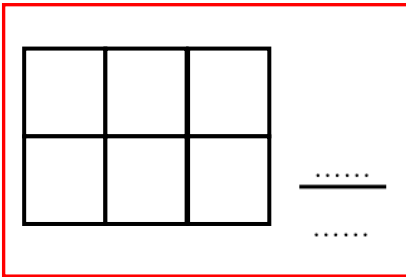
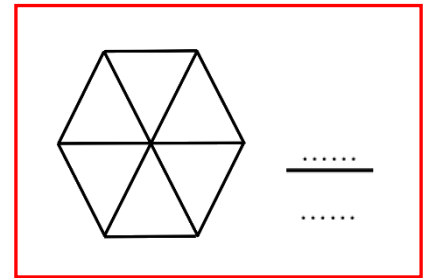
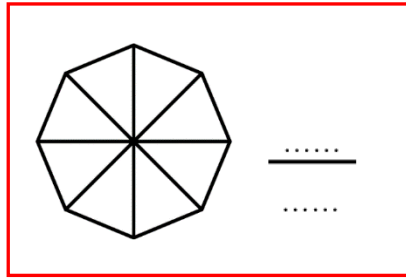

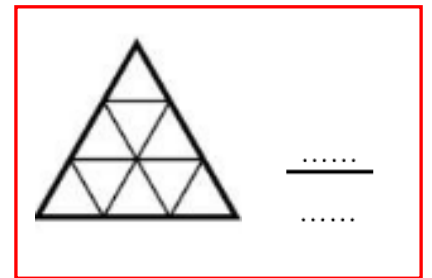
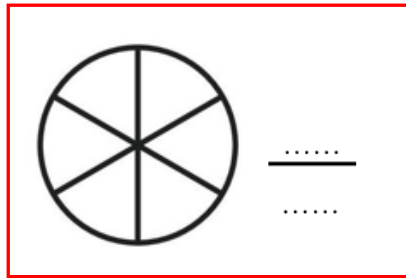
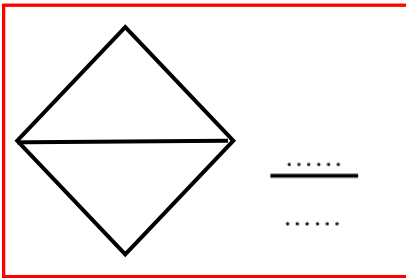
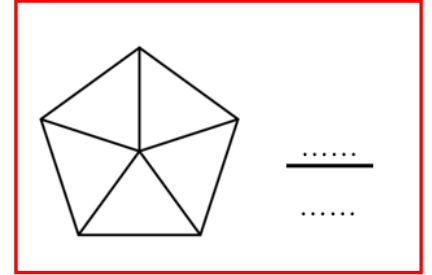
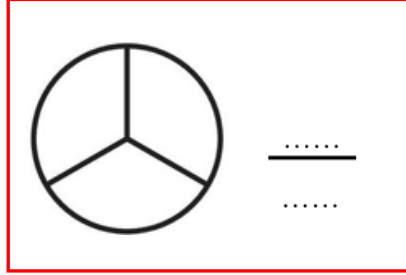
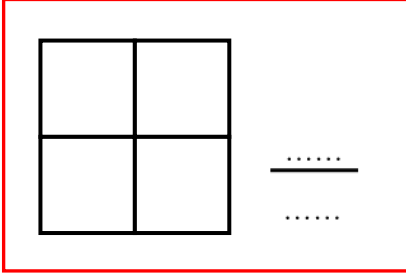




BİRİM KESİR

🌸 Aşağıdaki şekillerin birim kesir kadarını boyayarak kesir sayısını yazalım.





BİRİM KESİR

☸ Aşağıdaki birim kesir çiftlerini karşılaştıralım. " $<$ ", " $>$ " sembollerinden uygun olanı yazalım.

$$\frac{1}{4} \dots \frac{1}{7}$$

$$\frac{1}{5} \dots \frac{1}{3}$$

$$\frac{1}{10} \dots \frac{1}{9}$$

$$\frac{1}{6} \dots \frac{1}{8}$$

$$\frac{1}{13} \dots \frac{1}{12}$$

$$\frac{1}{24} \dots \frac{1}{21}$$

$$\frac{1}{16} \dots \frac{1}{18}$$

$$\frac{1}{27} \dots \frac{1}{28}$$

$$\frac{1}{53} \dots \frac{1}{55}$$

$$\frac{1}{40} \dots \frac{1}{39}$$

$$\frac{1}{34} \dots \frac{1}{37}$$

$$\frac{1}{62} \dots \frac{1}{60}$$

☸ Aşağıda verilen birim kesirleri sembol kullanarak büyükten küçüğe doğru sıralayalım.

$$\frac{1}{6}, \frac{1}{4}, \frac{1}{5}, \frac{1}{7}$$

$$\frac{1}{3}, \frac{1}{9}, \frac{1}{8}, \frac{1}{2}$$

$$\frac{1}{17}, \frac{1}{15}, \frac{1}{13}, \frac{1}{18}$$

$$\frac{1}{30}, \frac{1}{32}, \frac{1}{27}, \frac{1}{26}$$

☸ Aşağıda verilen birim kesirleri sembol kullanarak küçükten büyüğe doğru sıralayalım.

$$\frac{1}{8}, \frac{1}{3}, \frac{1}{6}, \frac{1}{9}$$

$$\frac{1}{5}, \frac{1}{2}, \frac{1}{7}, \frac{1}{4}$$

$$\frac{1}{14}, \frac{1}{17}, \frac{1}{10}, \frac{1}{12}$$

$$\frac{1}{25}, \frac{1}{28}, \frac{1}{23}, \frac{1}{26}$$