

MATEMATİK – FEN BİLİMLERİ – SOSYAL BİLGİLER

Verilen bütünleri istenilen kesirlere ayırınız.

--	--	--

$\frac{1}{4}$

$\frac{4}{5}$

$\frac{6}{8}$

--	--	--

$\frac{4}{6}$

$\frac{2}{7}$

$\frac{1}{3}$


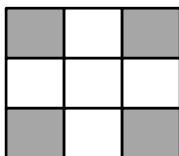

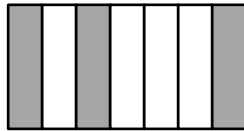
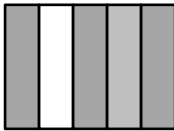
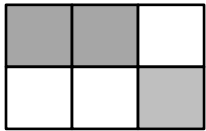

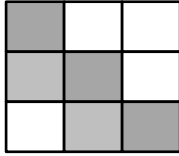

--	--	--

$\frac{2}{6}$

$\frac{6}{7}$

$\frac{8}{9}$

Verilen şekillerin kesirlerini yazınız.



Çevrenizde gördüğünüz katı, sıvı ve gaz maddeleri yazın. Özelliklerini açıklayın.

KATI	SIVI	GAZ

Verilen teknolojik araçların hangi alanda kullanıldığını yazınız.



Günün Sözü: Korkarak yaşarsan, yalnızca hayatı seyrederdin. Friedrich Nietzsche