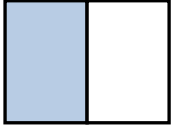




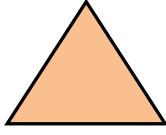
## KESİRLER



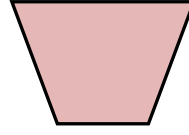
Aşağıdaki şekillerdeki boyalı alanları kesir sayılarıyla ifade edelim.



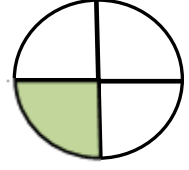
.....  
.....



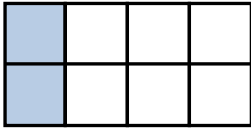
.....  
.....



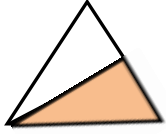
.....  
.....



.....  
.....




.....  
.....



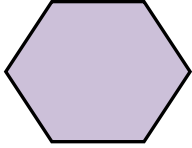
.....  
.....



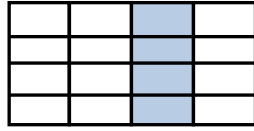
.....  
.....



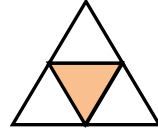
.....  
.....



.....  
.....



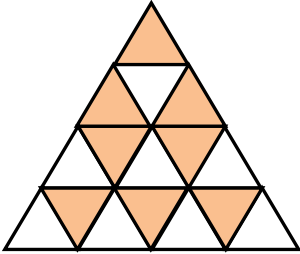
.....  
.....



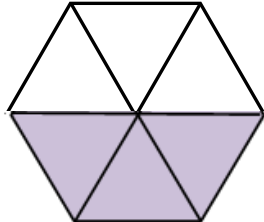
.....  
.....



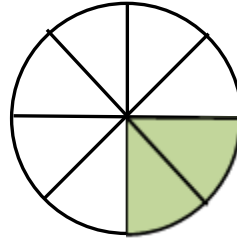
.....  
.....



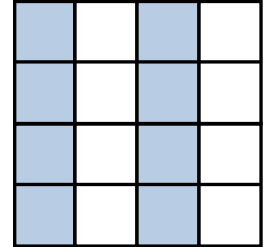
.....  
.....



.....  
.....



.....  
.....



.....  
.....



Aşağıda verilen kesir sayılarının yanına "bütün , yarım , çeyrek" kelimelerinden uygun olanını yazalım.

$$\frac{1}{4} \rightarrow \dots\dots\dots$$

$$\frac{3}{6} \rightarrow \dots\dots\dots$$

$$\frac{1}{1} \rightarrow \dots\dots\dots$$

$$\frac{2}{4} \rightarrow \dots\dots\dots$$

$$\frac{2}{8} \rightarrow \dots\dots\dots$$

$$\frac{5}{10} \rightarrow \dots\dots\dots$$

