



## KESİRLER

⚙️ Aşağıdaki birim kesir çiftlerini karşılaştıralım. " $<$ ", " $>$ ", " $=$ " sembollerinden uygun olanı yazalım.

$$\frac{6}{8} \dots \frac{4}{8}$$

$$\frac{3}{5} \dots \frac{4}{5}$$

$$\frac{8}{12} \dots \frac{10}{12}$$

$$\frac{16}{20} \dots \frac{13}{20}$$

$$\frac{40}{56} \dots \frac{42}{56}$$

$$\frac{7}{9} \dots \frac{8}{9}$$

$$\frac{38}{65} \dots \frac{35}{65}$$

$$\frac{19}{32} \dots \frac{18}{32}$$

$$\frac{15}{27} \dots \frac{13}{27}$$

$$\frac{24}{40} \dots \frac{26}{40}$$

$$\frac{12}{16} \dots \frac{14}{16}$$

$$\frac{57}{73} \dots \frac{56}{73}$$

⚙️ Aşağıda verilen kesirleri sembol kullanarak büyükten küçüğe doğru sıralayalım.

$$\frac{4}{8}, \frac{6}{8}, \frac{3}{8}$$

$$\frac{9}{15}, \frac{13}{15}, \frac{11}{15}$$

$$\frac{17}{20}, \frac{15}{20}, \frac{18}{20}$$

$$\frac{23}{44}, \frac{27}{44}, \frac{25}{44}$$

⚙️ Aşağıda verilen kesirleri sembol kullanarak büyükten küçüğe doğru sıralayalım.

$$\frac{6}{9}, \frac{8}{9}, \frac{5}{9}$$

$$\frac{14}{17}, \frac{10}{17}, \frac{12}{17}$$

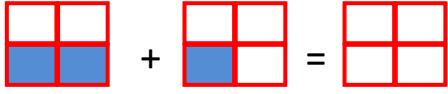
$$\frac{16}{26}, \frac{19}{26}, \frac{18}{26}$$

$$\frac{37}{50}, \frac{35}{50}, \frac{34}{50}$$

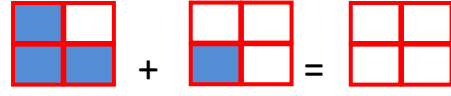


## KESİRLER

⚙️ Aşağıda şekillere göre toplama işlemlerini yapıp toplam kadarını boyayalım.



$$\frac{\dots}{\dots} + \frac{\dots}{\dots} = \frac{\dots}{\dots}$$



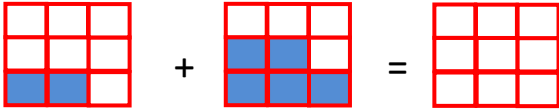
$$\frac{\dots}{\dots} + \frac{\dots}{\dots} = \frac{\dots}{\dots}$$



$$\frac{\dots}{\dots} + \frac{\dots}{\dots} = \frac{\dots}{\dots}$$



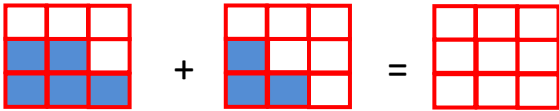
$$\frac{\dots}{\dots} + \frac{\dots}{\dots} = \frac{\dots}{\dots}$$



$$\frac{\dots}{\dots} + \frac{\dots}{\dots} = \frac{\dots}{\dots}$$




$$\frac{\dots}{\dots} + \frac{\dots}{\dots} = \frac{\dots}{\dots}$$



$$\frac{\dots}{\dots} + \frac{\dots}{\dots} = \frac{\dots}{\dots}$$




$$\frac{\dots}{\dots} + \frac{\dots}{\dots} = \frac{\dots}{\dots}$$




$$\frac{\dots}{\dots} + \frac{\dots}{\dots} = \frac{\dots}{\dots}$$



$$\frac{\dots}{\dots} + \frac{\dots}{\dots} = \frac{\dots}{\dots}$$



$$\frac{\dots}{\dots} + \frac{\dots}{\dots} = \frac{\dots}{\dots}$$



$$\frac{\dots}{\dots} + \frac{\dots}{\dots} = \frac{\dots}{\dots}$$