


Verilen görsellere ait sayıları örnekteki gibi toplayalım.




2




3




4



5



6



7

$$\text{Flower} + \text{Cat} = \boxed{6}$$

$$\text{Watermelon} + \text{Backpack} = \boxed{}$$

$$\text{Palette} + \text{Cupcake} = \boxed{}$$

$$\text{Cupcake} + \text{Cupcake} = \boxed{}$$

$$\text{Watermelon} + \text{Flower} = \boxed{}$$

$$\text{Cat} + \text{Watermelon} = \boxed{}$$

$$\text{Backpack} + \text{Cat} = \boxed{}$$

$$\text{Cupcake} + \text{Flower} = \boxed{}$$

$$\text{Watermelon} + \text{Palette} = \boxed{}$$

$$\text{Flower} + \text{Flower} = \boxed{}$$

$$\text{Flower} + \text{Backpack} = \boxed{}$$

$$\text{Palette} + \text{Backpack} = \boxed{}$$