

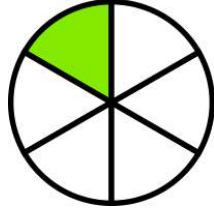


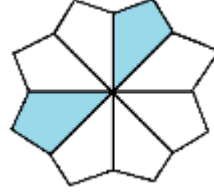
KESİRLER

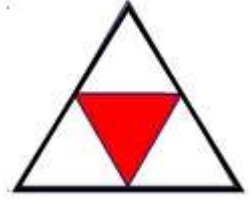


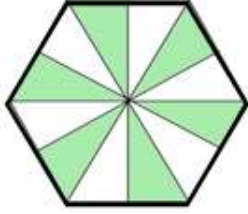
Aşağıdaki şekillerdeki boyalı alanları kesir sayısı şeklinde yazınız.



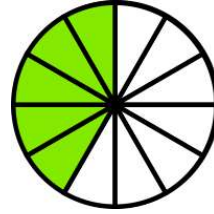
$$\frac{\dots}{\dots}$$


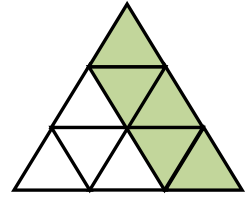
$$\frac{\dots}{\dots}$$



$$\frac{\dots}{\dots}$$


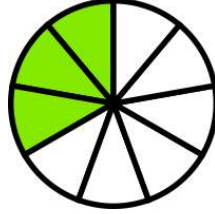
$$\frac{\dots}{\dots}$$


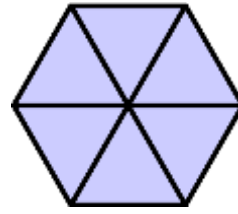
$$\frac{\dots}{\dots}$$

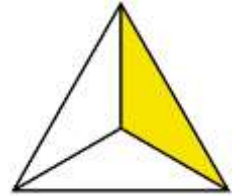

$$\frac{\dots}{\dots}$$


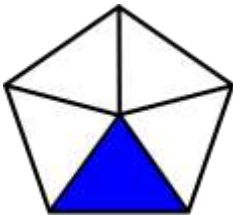
$$\frac{\dots}{\dots}$$


$$\frac{\dots}{\dots}$$


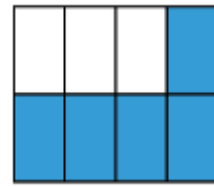
$$\frac{\dots}{\dots}$$



$$\frac{\dots}{\dots}$$


$$\frac{\dots}{\dots}$$


$$\frac{\dots}{\dots}$$


$$\frac{\dots}{\dots}$$


$$\frac{\dots}{\dots}$$


$$\frac{\dots}{\dots}$$


$$\frac{\dots}{\dots}$$