



$$\square + \square = \square$$



$$\square + \square = \square$$



$$\square + \square = \square$$



$$\square + \square = \square$$



$$\square + \square = \square$$




$$\square + \square = \square$$



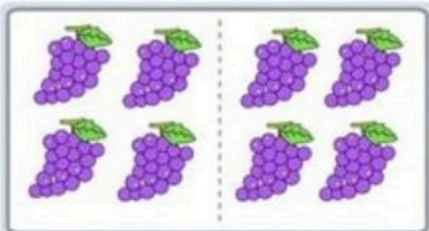
$$\square + \square = \square$$




$$\square + \square = \square$$




$$3 + 4 = \square$$




$$4 + 4 = \square$$




$$3 + 3 = \square$$



$$6 + 3 = \square$$



$$4 + 6 = \square$$



$$2 + 4 = \square$$



1

2

3

4

5

6

7



+



=



+



=



+



=



+



=



+



=



+



=



+



=



+



=



+



=



+



=



+



=



+



=



+



=



+



=