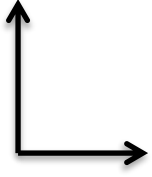
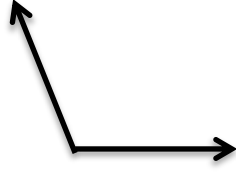


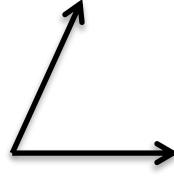
4. SINIF – MATEMATİK – AÇILAR ETKİNLİĞİ



1



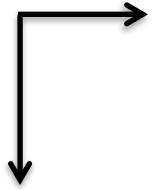
2



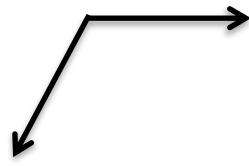
3




4



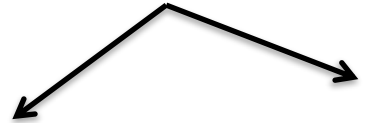
5




6




7



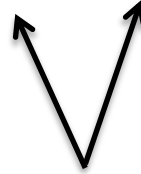
8



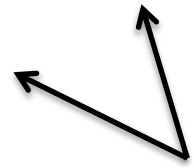
9



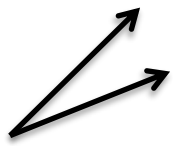
10




11



12




13



14



15



16

1. dik açı

2.....

3.....

4.....

5.....

6.....

7.....

8.....

9.....

10.....

11.....

12.....

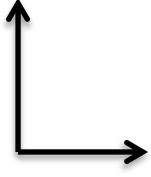
13.....

14.....

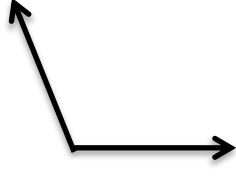
15.....

16.....

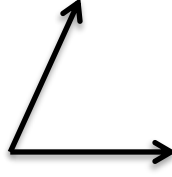
Verilen üçgenleri isimlendirin.



.....
.....
.....



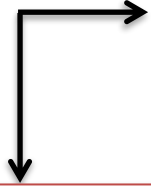
.....
.....
.....



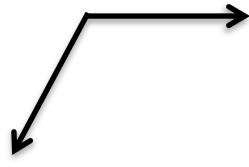
.....
.....
.....




.....
.....
.....



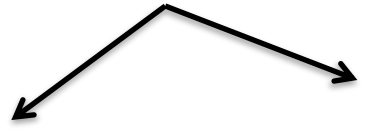
.....
.....
.....




.....
.....
.....




.....
.....
.....




.....
.....
.....



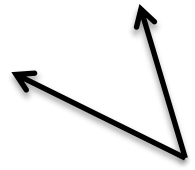
.....
.....
.....



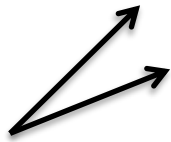
.....
.....
.....




.....
.....
.....



.....
.....
.....




.....
.....
.....



.....
.....
.....



.....
.....
.....



.....
.....
.....