


4.SINIF – MATEMATİK – AÇI TÜRLERİ ETKİNLİĞİ

Saatlerdeki akrep ve yelkovan arasındaki açıları ölçüp türlerini altına yazın.



Dik Açı – 90°




.....




.....



.....



.....



.....




.....



.....



.....



.....



.....




.....



.....



.....



.....



.....




.....



.....




.....



.....



.....



.....



.....



.....



.....



.....



.....



.....



.....



.....



.....



.....