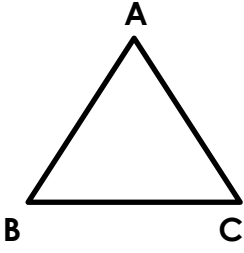


Verilen üçgenlerin türlerini altlarına yazın.

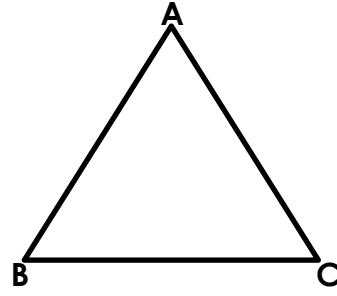


[AB] =

[AC] =

[BC] =

Üçgen çeşidi:

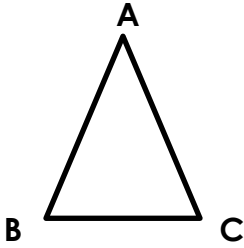


[AB] =

[AC] =

[BC] =

Üçgen çeşidi:

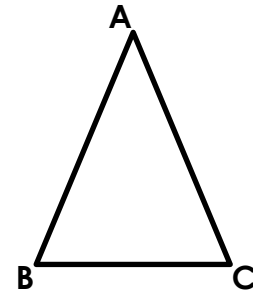


[AB] =

[AC] =

[BC] =

Üçgen çeşidi:

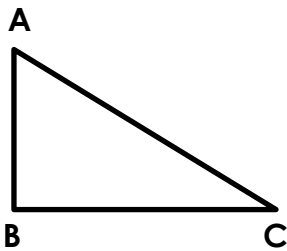


[AB] =

[AC] =

[BC] =

Üçgen çeşidi:

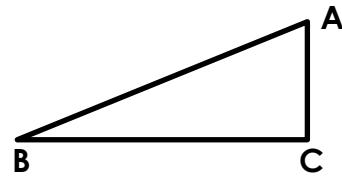


[AB] =

[AC] =

[BC] =

Üçgen çeşidi:



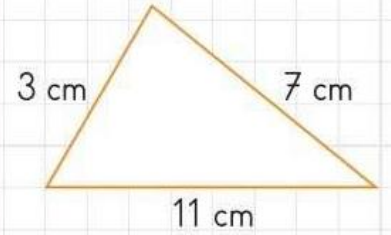
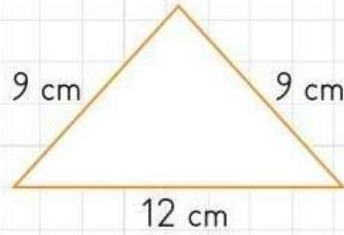
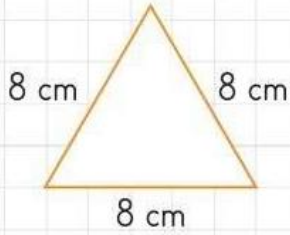
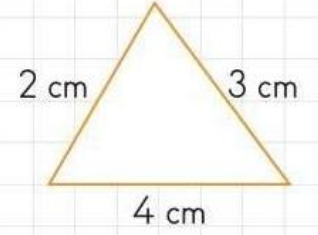
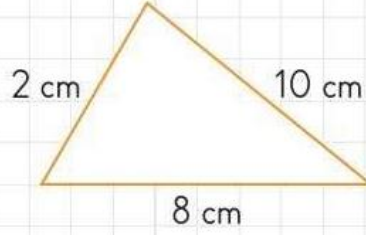
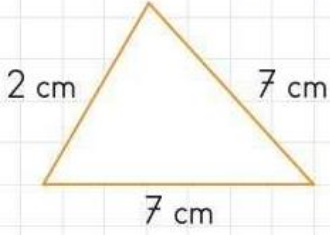
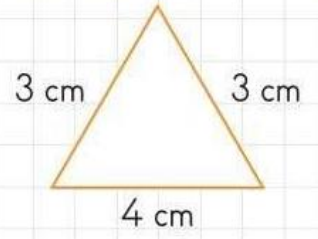
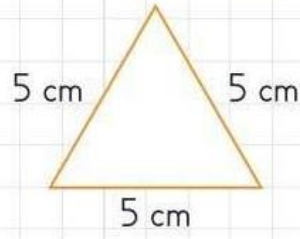
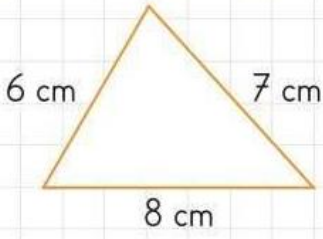
[AB] =

[AC] =

[BC] =

Üçgen çeşidi:

Kenar uzunlukları verilen üçgenlerin çeşitlerini altlarına yazın.



Kenar uzunlukları verilen üçgenlerin çeşitlerini noktalı yerlere yazın.

$|AB| = 5 \text{ cm}, |BC| = 6 \text{ cm}, |CA| = 6 \text{ cm}$

$|KL| = 12 \text{ cm}, |LM| = 8 \text{ cm}, |MK| = 5 \text{ cm}$

$|DE| = 9 \text{ cm}, |EF| = 9 \text{ cm}, |FD| = 9 \text{ cm}$

$|AK| = 10 \text{ cm}, |KB| = 10 \text{ cm}, |BA| = 3 \text{ cm}$

$|TM| = 3 \text{ cm}, |MS| = 5 \text{ cm}, |ST| = 7 \text{ cm}$

$|YU| = 4 \text{ cm}, |UK| = 4 \text{ cm}, |KY| = 4 \text{ cm}$