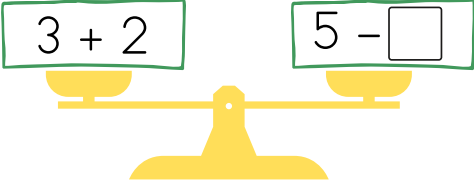
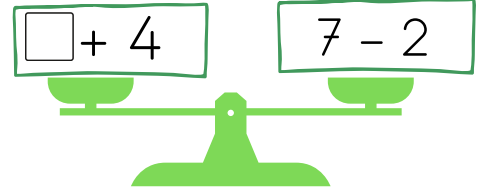


TOPLAMA VE ÇIKARMADA EŞİTLİK

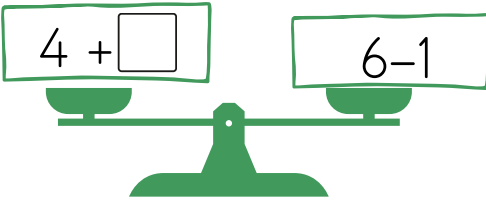
Aşağıdaki işlemlerde eşitliği sağlamak için kutucuklara hangi sayı gelmelidir?



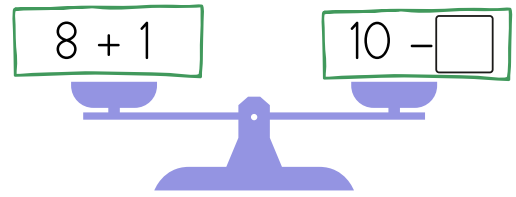
$3 + 2$ $5 - \square$



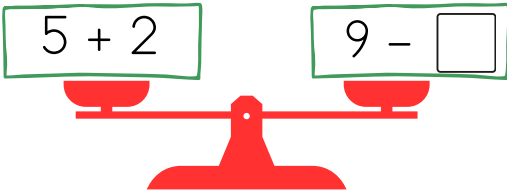
$\square + 4$ $7 - 2$



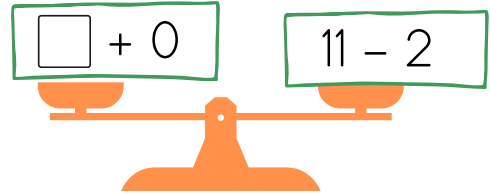
$4 + \square$ $6 - 1$



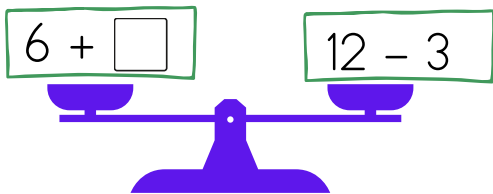
$8 + 1$ $10 - \square$



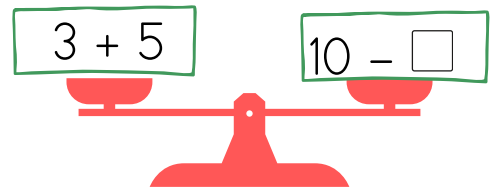
$5 + 2$ $9 - \square$



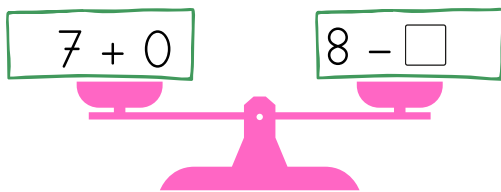
$\square + 0$ $11 - 2$



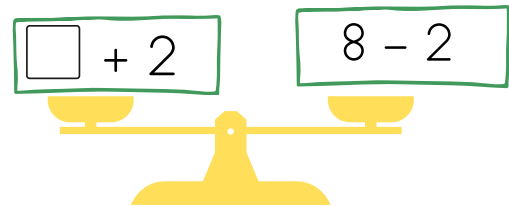
$6 + \square$ $12 - 3$



$3 + 5$ $10 - \square$



$7 + 0$ $8 - \square$



$\square + 2$ $8 - 2$

Aşağıdaki işlemlerde eşitliği sağlamak için kutucuklara hangi sayı gelmelidir?

@gunes_ogretmenle_etkinlikler

$$3 + 4 = 7$$

$$\square + 2 = 7$$

$$\square + 1 = 9$$

$$6 + 3 = 9$$

$$10 + 0 = 10$$

$$6 + \square = 10$$

$$3 + 6 = 9$$

$$9 + \square = 9$$

$$\square + 3 = 10$$

$$5 + 5 = 10$$

$$12 + 0 = 12$$

$$6 + \square = 12$$

$$\square + 8 = 11$$

$$10 + 1 = 11$$

$$6 + 7 = 13$$

$$\square + 5 = 13$$

$$15 + \square = 20$$

$$12 + 8 = 20$$

$$12 + 7 = 19$$

$$18 + \square = 19$$

$$8 + \square = 16$$

$$10 + 6 = 19$$

$$11 + 3 = 14$$

$$\square + 5 = 14$$