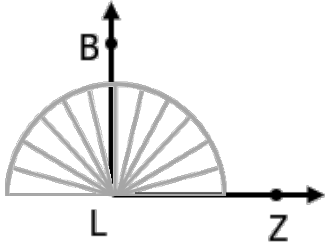




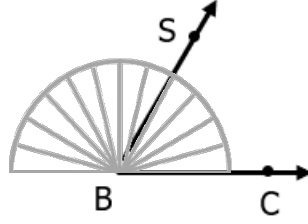
## AÇI

a Standart olmayan açölçerlerle aşağıdaki açları ölçüp sonucu örnekteki gibi bulalım.

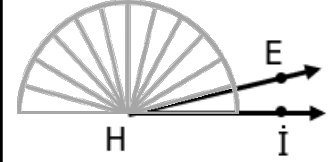


$$180 \div 12 = 15^\circ$$

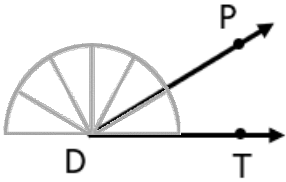
$$15 \times 6 = 90^\circ$$



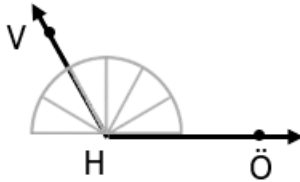
.....  
.....



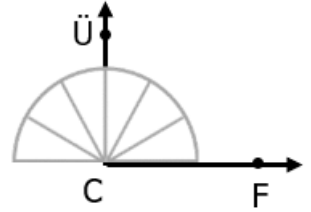
.....  
.....



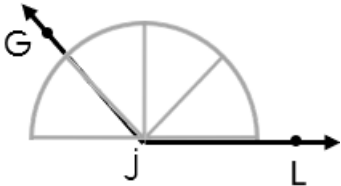
.....  
.....



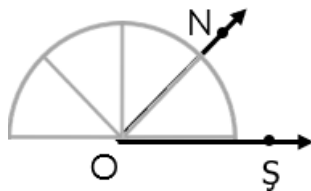
.....  
.....



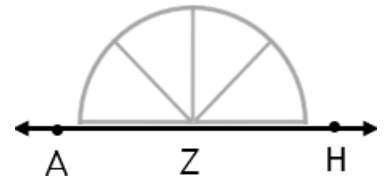
.....  
.....



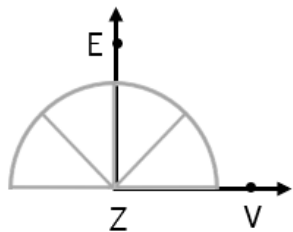
.....  
.....



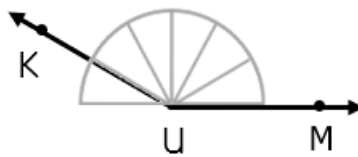
.....  
.....



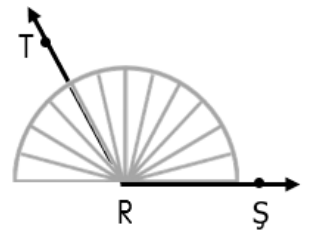
.....  
.....



.....  
.....



.....  
.....



.....  
.....