

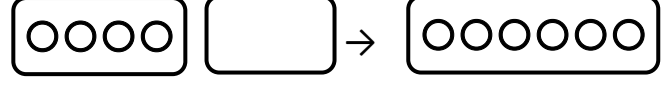


## VERİLMİYEN TOPLANANI BULMA

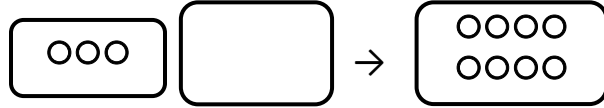
a Aşağıdaki verilen toplama işlemlerinde verilmeyen toplananları şekil çizerek bulalım.



$$3 + \dots = 4$$



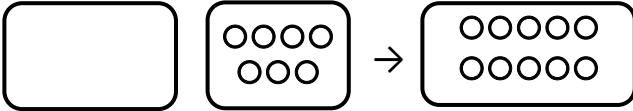
$$4 + \dots = 6$$



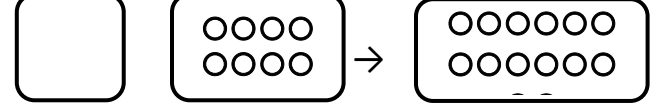
$$3 + \dots = 8$$



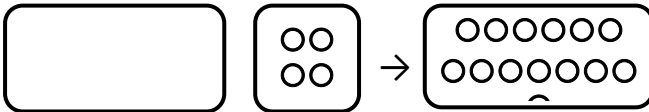
$$2 + \dots = 9$$



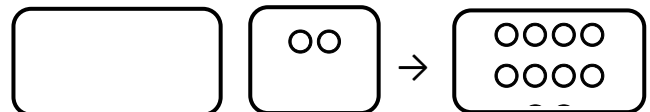
$$\dots + 7 = 10$$



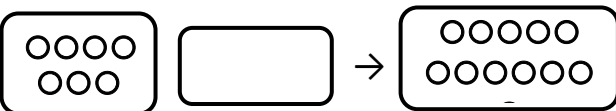
$$\dots + 8 = 12$$



$$\dots + 4 = 12$$



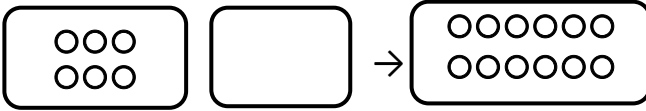
$$\dots + 2 = 8$$



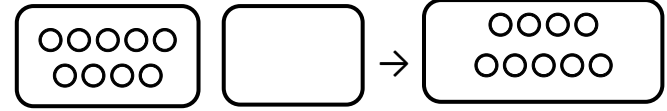
$$7 + \dots = 10$$



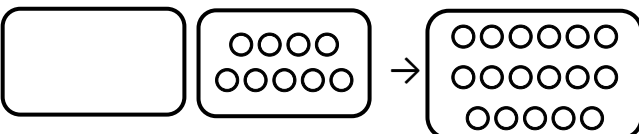
$$5 + \dots = 12$$



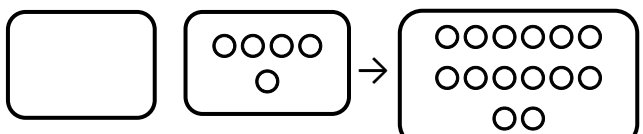
$$6 + \dots = 12$$



$$9 + \dots = 9$$



$$\dots + 9 = 17$$



$$\dots + 10 = 16$$