




Adı Soyadı :

Numarası :


Çalışma Kağıdı 1

Konu: Alan Ölçme Etkinliği 2

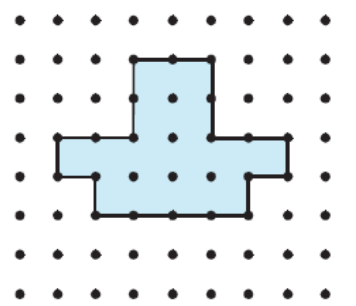
Aşağıdaki şekillerin alanlarının kaç birim kare olduğunu altlarına yazınız.



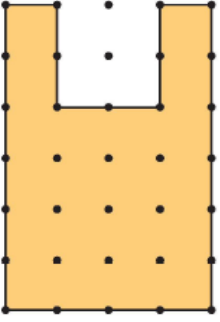
..... birim kare



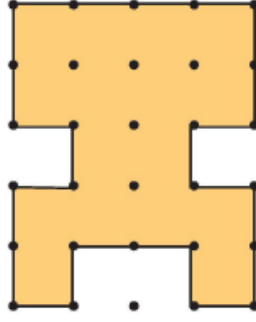
..... birim kare



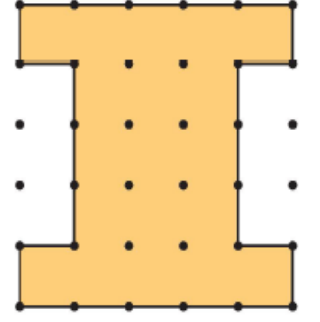
..... birim kare



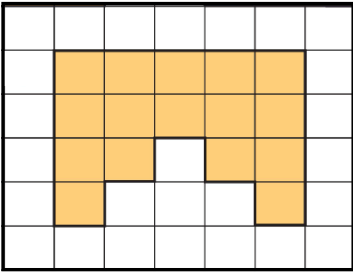
..... birim kare



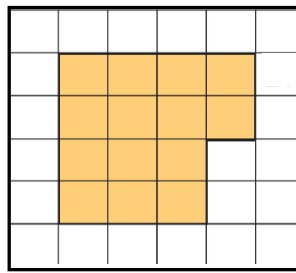
..... birim kare



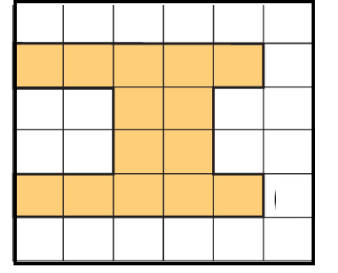
..... birim kare



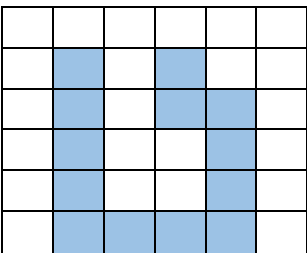
..... birim kare



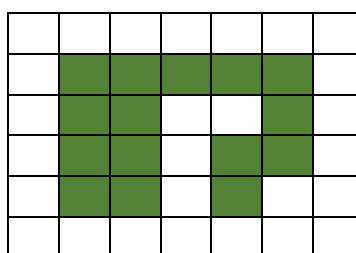
..... birim kare



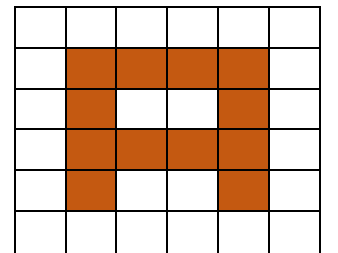
..... birim kare



..... birim kare



..... birim kare



..... birim kare

