



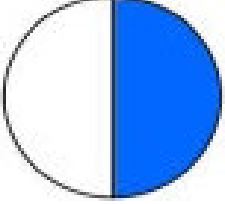
Adı Soyadı : .....

Numarası : .....


Çalışma Kağıdı

Konu: Kesirler Etkinliği 2


Aşağıda verilen şekillerin boyalı kısımlarına göre "bütün – yarım – çeyrek" ifadelerinden uygun olanlarını yazınız




.....




.....




.....



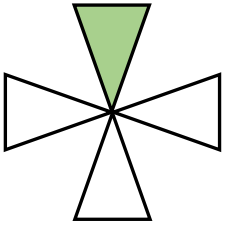
.....



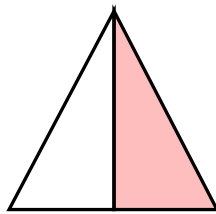
.....



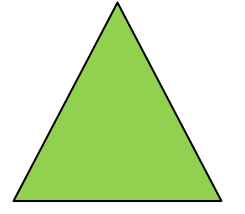
.....



.....



.....




.....

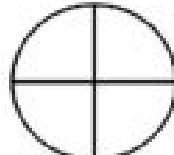
Aşağıdaki şekillerin altında belirtilen ifade kadarını boyayalım.




Çeyrek



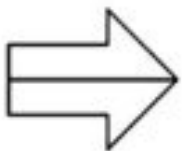
Bütün




Çeyrek



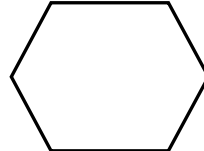
Yarım



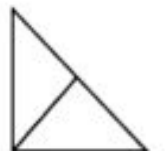
Yarım



Çeyrek



Bütün



yarım

Aşağıdaki boşlukları uygun sayılarla dolduralım

1 bütün ..... yarım eder.  
2 bütün ..... yarım eder.  
3 bütün ..... yarım eder.  
5 bütün .... yarım eder.


1 bütün ..... çeyrek eder.  
2 bütün ..... çeyrek eder.  
3 bütün ..... çeyrek eder.  
4 bütün ..... çeyrek eder.

2 yarım .... bütün eder.  
4 yarım ..... bütün eder.  
6 yarım ..... bütün eder.  
10 yarım .... bütün eder.


Aşağıdaki şekillerin altında belirtilen ifade kadarını boyayınız.



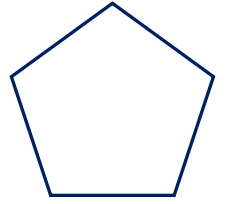
Çeyrek



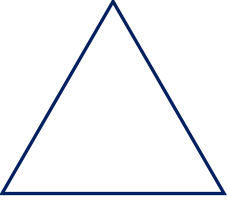
Bütün




Çeyrek



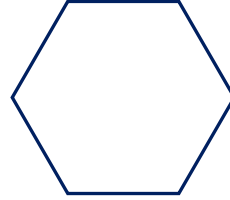
Yarım



Yarım



Bütün



Yarım

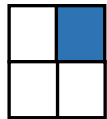


Çeyrek

Aşağıdaki öğrencilerin verilen şekillerle ilgili söylediği ifadeler doğru ise "D", yanlış ise "Y" yazınız.



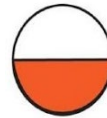
Şeklin tamamı boyanmıştır. ( )



Şeklin yarısı boyanmıştır. ( )



Şeklin çeyreği boyanmıştır. ( )



Şeklin yarısı boyanmıştır. ( )