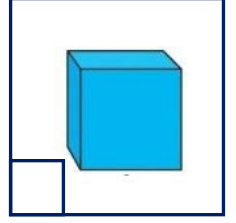
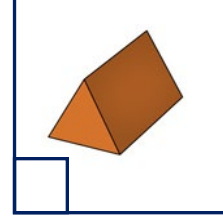
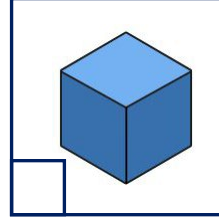
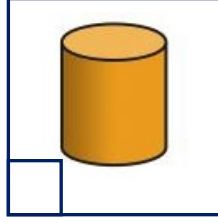
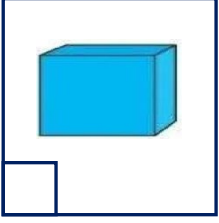


Konu: Geometrik Cisimleri Tanıyalım

Aşağıdaki geometrik cisimlerin adlarını verilen numaralara göre eşleştirelim.



1

Küp

2

Üçgen Prizma

3

Silindir

4

Dikdörtgen Prizma

5

Kare Prizma

6

Küre


Aşağıdaki görsellerin hangi geometrik cisme benzediğini altlarına yazalım.



.....



.....



.....



.....



.....



.....



.....




.....



.....

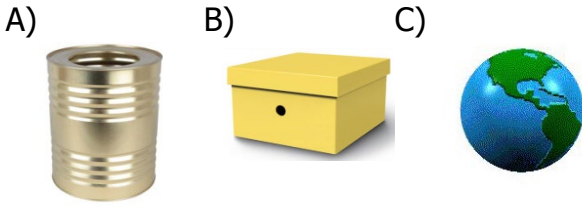
1 Aşağıdaki cisimlerden hangisi küreye benzer?



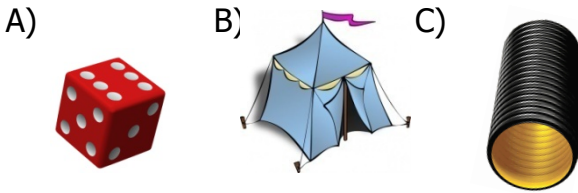
2 Aşağıdakilerden hangisi üçgen prizmaya örnektir?



3 Aşağıdakilerden hangisi kare prizmaya örnektir?

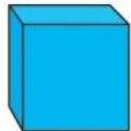


4 Aşağıdaki cisimlerden hangisiyle çember çizebiliriz?



5 Yandaki model aşağıdakilerden hangisine örnektir?

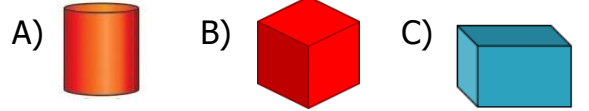
- A) Küp
B) Kare Prizma
C) Dikdörtgen Prizma



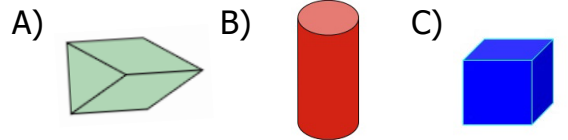
6 Aşağıdaki nesnelere hangisi benzediği geometrik cisimle yanlış eşleştirilmiştir?



7 Aşağıdaki cisimlerden hangisinin köşesi yoktur?



8 Aşağıdaki geometrik cisimlerin hangisi ile üçgen çizebiliriz?



9 Yandaki cisim hangi geometrik cisme benzemektedir?

- A) Küre
B) Küp
C) Silindir



10 Aşağıdaki geometrik şekillerden hangisi prizma değildir?

