



Adı Soyadı :

Numarası :

Konu: Toplama ve Çıkarma İşlemleri 2

Aşağıdaki toplama ve çıkarma işlemlerini yapınız.

$$5 + 4 = \boxed{\dots}$$

$$\begin{array}{r} - 2 \\ \hline \end{array}$$

 $\boxed{\dots}$

$$8 + 2 = \boxed{\dots}$$

$$\begin{array}{r} - 4 \\ \hline \end{array}$$

 $\boxed{\dots}$

$$9 + 4 = \boxed{\dots}$$

$$\begin{array}{r} - 7 \\ \hline \end{array}$$

 $\boxed{\dots}$

$$6 + 4 = \boxed{\dots}$$

$$\begin{array}{r} - 3 \\ \hline \end{array}$$

 $\boxed{\dots}$

$$10 + 5 = \boxed{\dots}$$

$$\begin{array}{r} - 6 \\ \hline \end{array}$$

 $\boxed{\dots}$

$$8 + 6 = \boxed{\dots}$$

$$\begin{array}{r} - 4 \\ \hline \end{array}$$

 $\boxed{\dots}$

$$12 + 7 = \boxed{\dots}$$

$$\begin{array}{r} - 8 \\ \hline \end{array}$$

 $\boxed{\dots}$

$$11 + 4 = \boxed{\dots}$$

$$\begin{array}{r} - 9 \\ \hline \end{array}$$

 $\boxed{\dots}$

$$13 + 5 = \boxed{\dots}$$

$$\begin{array}{r} - 8 \\ \hline \end{array}$$

 $\boxed{\dots}$

$$10 + 3 = \boxed{\dots}$$

$$\begin{array}{r} - 5 \\ \hline \end{array}$$

 $\boxed{\dots}$

$$14 + 5 = \boxed{\dots}$$

$$\begin{array}{r} - 7 \\ \hline \end{array}$$

 $\boxed{\dots}$

$$7 + 6 = \boxed{\dots}$$

$$\begin{array}{r} - 4 \\ \hline \end{array}$$

 $\boxed{\dots}$

$$16 + 4 = \boxed{\dots}$$

$$\begin{array}{r} - 8 \\ \hline \end{array}$$

 $\boxed{\dots}$

$$12 + 3 = \boxed{\dots}$$

$$\begin{array}{r} - 6 \\ \hline \end{array}$$

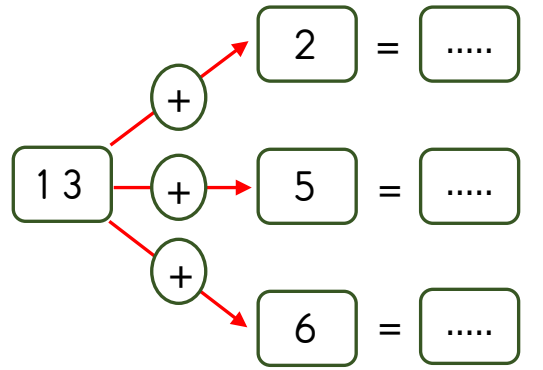
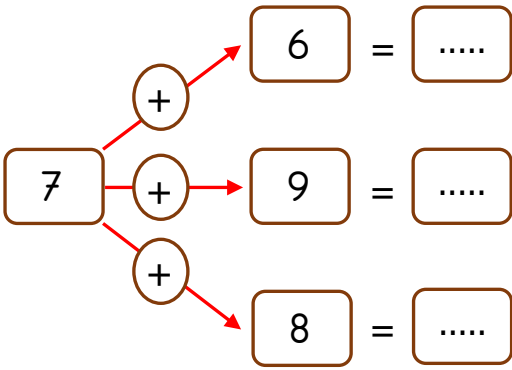
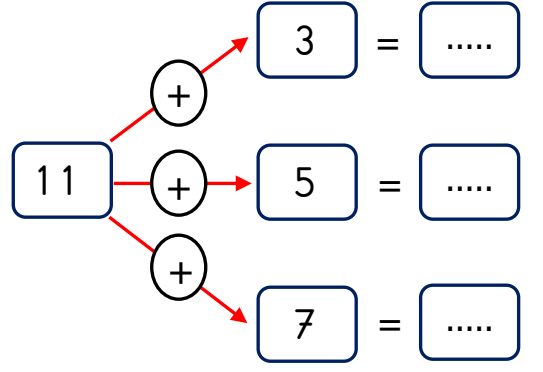
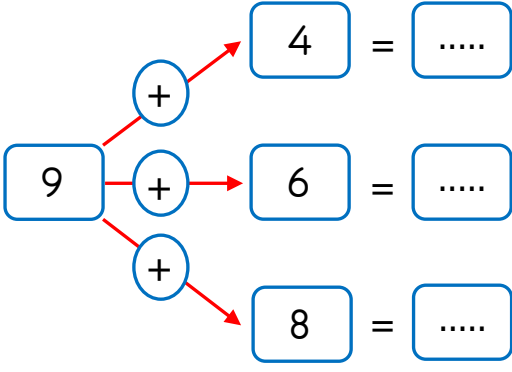
 $\boxed{\dots}$

$$8 + 8 = \boxed{\dots}$$

$$\begin{array}{r} - 9 \\ \hline \end{array}$$

 $\boxed{\dots}$

Aşağıdaki toplama işlemlerini yapınız.



Aşağıdaki çıkarma işlemlerini yapınız.

