

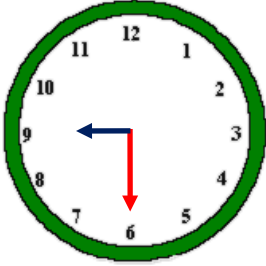


Adı Soyadı : .....

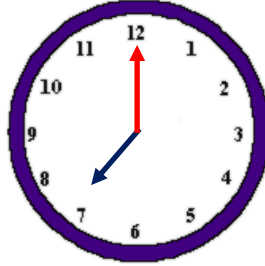
Numarası : .....

Konu: Zamanı Ölçme (Saatler)

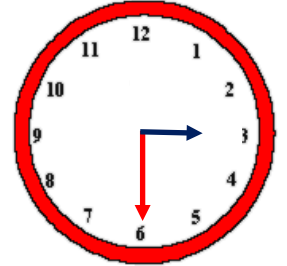
Aşağıdaki saatlerin kaç gösterdiğini örnekteki gibi altlarına yazalım.



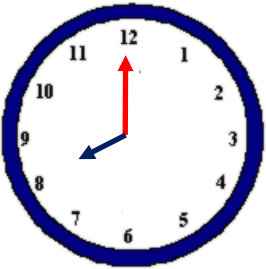
Saat: 9 buçuk



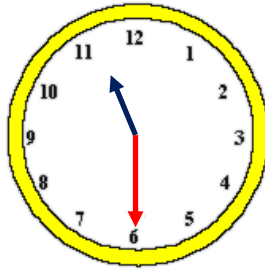
Saat: .....



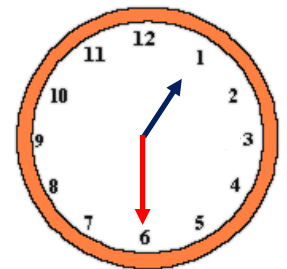
Saat: .....



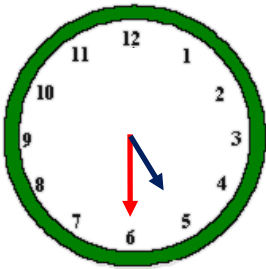
Saat: .....



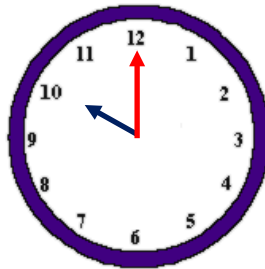
Saat: .....



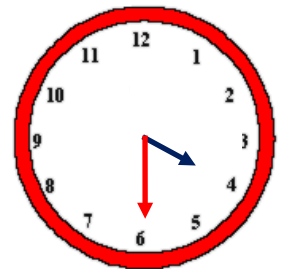
Saat: .....



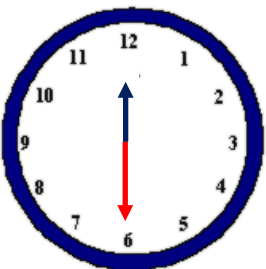
Saat: .....



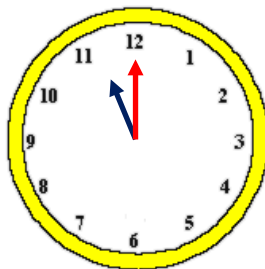
Saat: .....



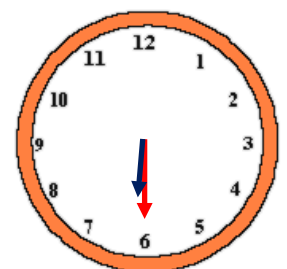
Saat: .....



Saat: .....

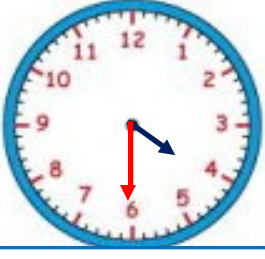


Saat: .....



Saat: .....

Okunuşları verilen saatlerin akrep ve yelkovanlarını örnekteki gibi çizelim.



Saat: 4 buçuk



Saat: 8



Saat: 3



Saat: 10 buçuk



Saat: 9



Saat: 6 buçuk



Saat: 11



Saat: 12 buçuk



Saat: 6



Saat: 7 buçuk



Saat: 12



Saat: 1