

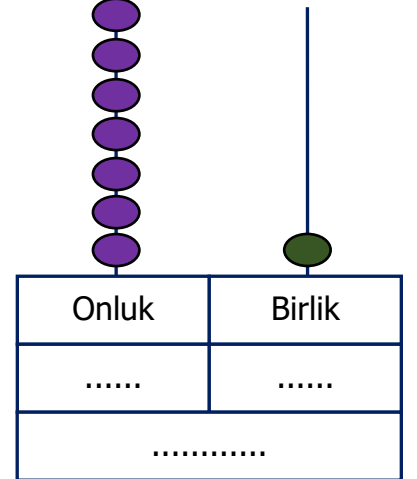
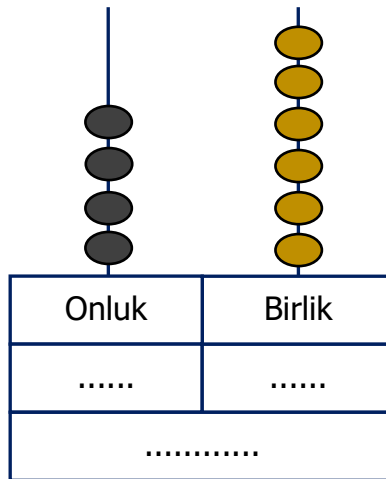
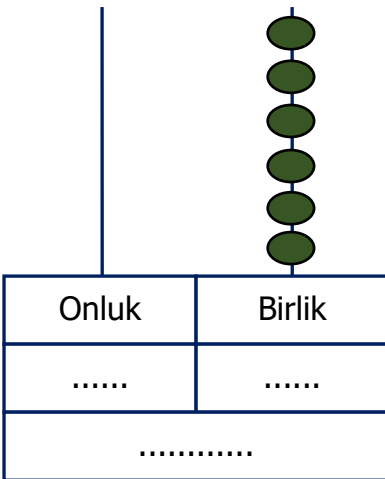
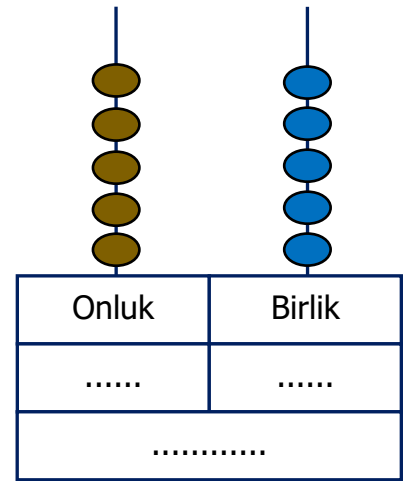
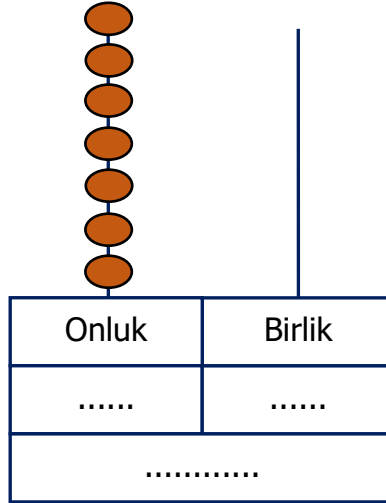
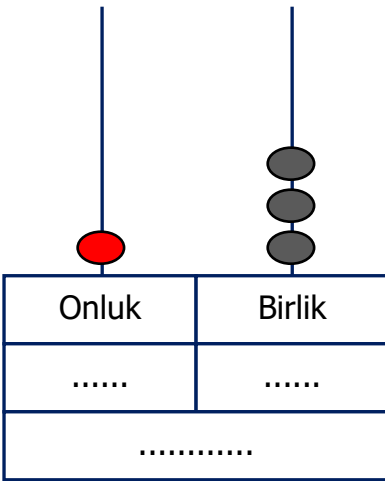
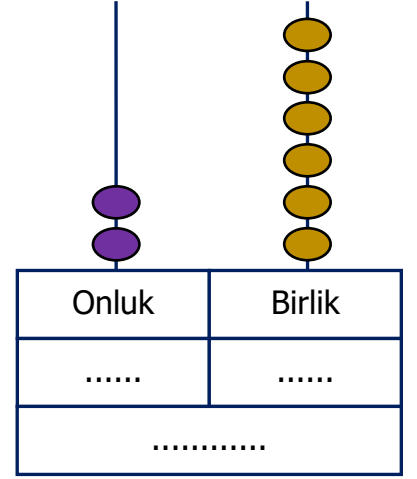
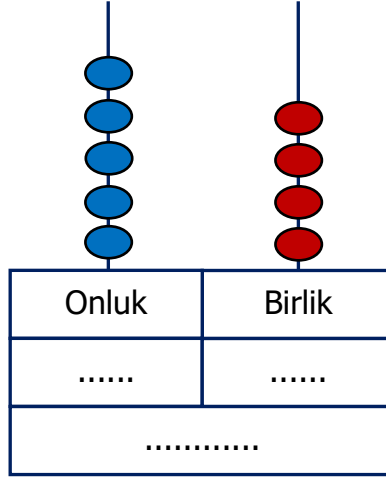
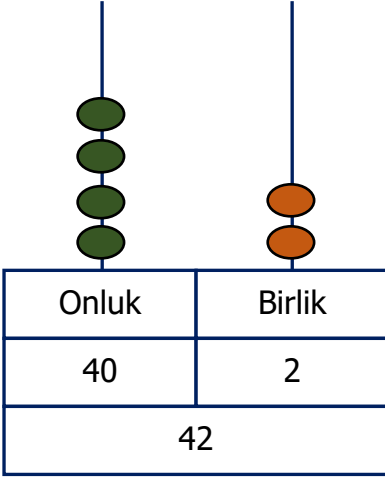


Adı Soyadı :

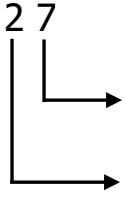
Numarası :

Konu: Basamak Değerini Bulalım 4

Aşağıdaki abaküste gösterilen boncukların örnekteki gibi basamak değerlerini yazınız.



Aşağıdaki sayıların basamak adlarını ve basamak değerlerini yazınız.



Basamak Adı

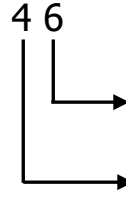
.....

.....

Basamak Değeri

.....

.....



Basamak Adı

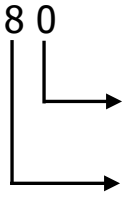
.....

.....

Basamak Değeri

.....

.....



Basamak Adı

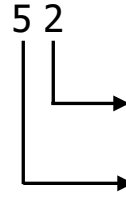
.....

.....

Basamak Değeri

.....

.....



Basamak Adı

.....

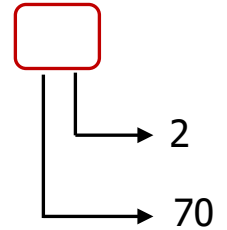
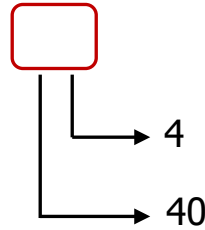
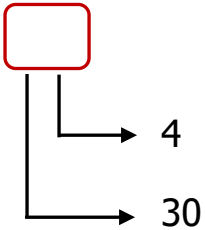
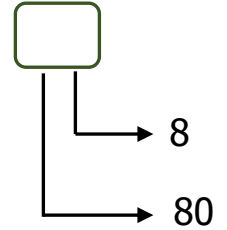
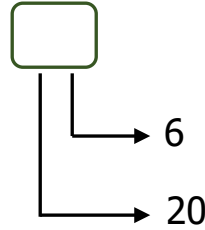
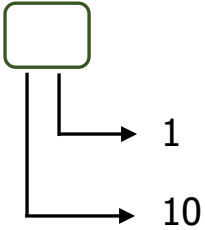
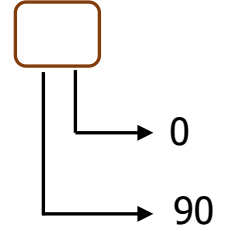
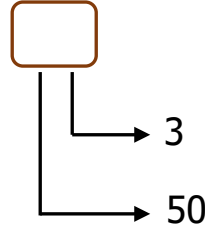
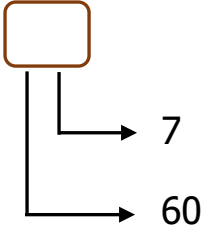
.....

Basamak Değeri

.....

.....

Aşağıda basamak değerleri verilen doğal sayıları bulup kutulara yazınız



1) "72" sayısı hangi seçenekte basamaklarına doğru ayrılmıştır?

A)

72	
Onlar Basamağı	Birler Basamağı
70	20

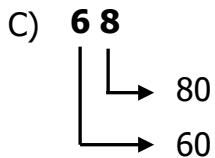
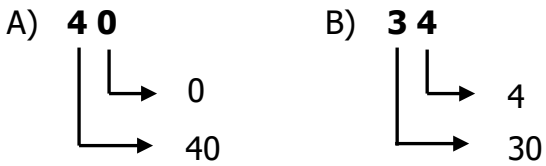
B)

72	
Onlar Basamağı	Birler Basamağı
70	2

C)

72	
Onlar Basamağı	Birler Basamağı
7	20

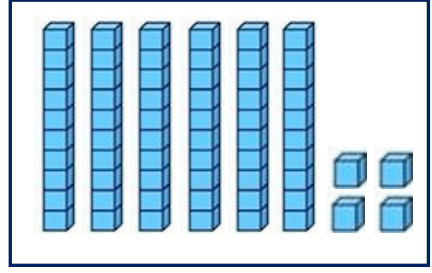
2) Aşağıdaki sayılardan hangisinin basamak değerleri gösterilirken hata yapılmıştır?



3) Onlar basamağındaki rakamın basamak değeri 50, birler basamağındaki rakamın basamak değeri 3 olan doğal sayı kaçtır?

- C) 53 B) 35 C) 50

4)



Yukarıdaki kutuda bloklarla oluşturulan sayı aşağıdakilerden hangisidir?

- A) 46 B) 54 C) 64

5)



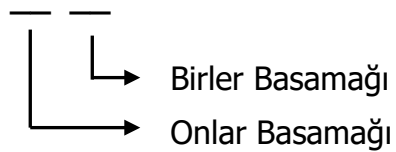
Murat

Aklımda tuttuğum sayının onlar basamağının basamak değeri 80'dir.

Murat'ın aklında tuttuğu sayı aşağıdakilerden hangisi olamaz?

- A) 18 B) 81 C) 87

6)



Birler basamağı "5", onlar basamağı "7" olan sayı aşağıdakilerden hangisidir?

- B) 57 B) 75 C) 60