



Adı Soyadı :

Numarası :

Konu: Zihinden Çıkarma İşlemi Etkinliği

Aşağıdaki çıkarma işlemlerini zihinden yapınız.

a) $90 - 20 = \dots\dots\dots$

m) $100 - 30 = \dots\dots\dots$

g) $120 - 10 = \dots\dots\dots$

b) $80 - 40 = \dots\dots\dots$

n) $300 - 20 = \dots\dots\dots$

h) $430 - 50 = \dots\dots\dots$

c) $90 - 30 = \dots\dots\dots$

o) $600 - 40 = \dots\dots\dots$

i) $340 - 20 = \dots\dots\dots$

d) $50 - 10 = \dots\dots\dots$

p) $800 - 70 = \dots\dots\dots$

j) $610 - 70 = \dots\dots\dots$

e) $70 - 20 = \dots\dots\dots$

q) $400 - 50 = \dots\dots\dots$

k) $550 - 40 = \dots\dots\dots$

f) $90 - 80 = \dots\dots\dots$

r) $700 - 80 = \dots\dots\dots$

l) $110 - 80 = \dots\dots\dots$

a) $370 - 100 = \dots\dots\dots$

g) $140 - 100 = \dots\dots\dots$

m) $170 - 80 = \dots\dots\dots$

b) $250 - 100 = \dots\dots\dots$

h) $750 - 300 = \dots\dots\dots$

n) $150 - 60 = \dots\dots\dots$

c) $420 - 200 = \dots\dots\dots$

i) $660 - 200 = \dots\dots\dots$

o) $230 - 90 = \dots\dots\dots$

d) $530 - 300 = \dots\dots\dots$

j) $950 - 400 = \dots\dots\dots$

p) $130 - 70 = \dots\dots\dots$

e) $640 - 400 = \dots\dots\dots$

k) $520 - 500 = \dots\dots\dots$

q) $290 - 50 = \dots\dots\dots$

f) $710 - 300 = \dots\dots\dots$

l) $840 - 400 = \dots\dots\dots$

r) $130 - 70 = \dots\dots\dots$

Aşağıdaki tabloda verilen çıkarma işlemlerini zihinden yapınız.

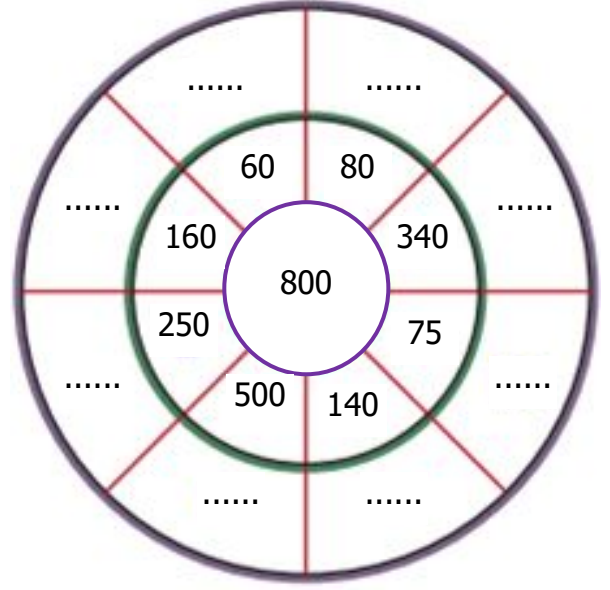
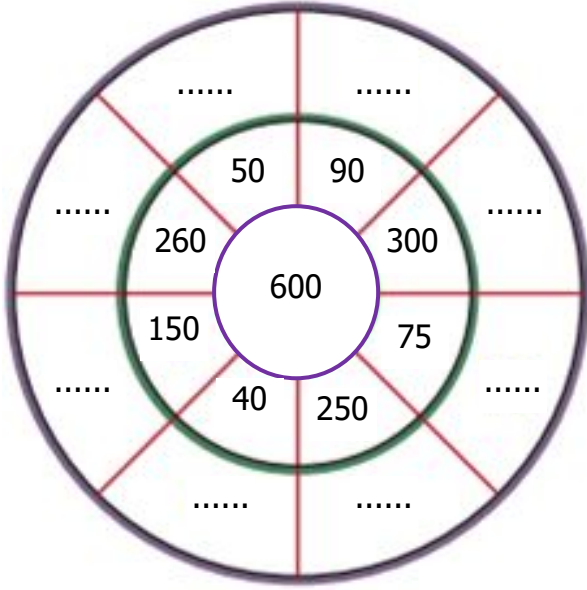
-	20	30	40	50
200				
300				
400				

-	60	70	80	90
180				
270				
450				

-	100	200	300	400
485				
520				
632				

-	300	400	500	600
780				
825				
960				

Aşağıda verilen sayı çarkının ortasındaki sayı ile kenarlarındaki sayıları zihinden çıkarıp noktalı yerlere yazınız.



Aşağıdaki çıkarma işlemlerini zihinden yapalım.

$350 - 20 = \dots\dots\dots$

$680 - 70 = \dots\dots\dots$

$980 - 30 = \dots\dots\dots$

$750 - 600 = \dots\dots\dots$

$890 - 800 = \dots\dots\dots$

$920 - 600 = \dots\dots\dots$

$750 - 100 = \dots\dots\dots$

$890 - 400 = \dots\dots\dots$

$760 - 100 = \dots\dots\dots$

$356 - 300 = \dots\dots\dots$

$478 - 400 = \dots\dots\dots$

$325 - 300 = \dots\dots\dots$

$748 - 500 = \dots\dots\dots$

$817 - 300 = \dots\dots\dots$

$496 - 100 = \dots\dots\dots$

$955 - 200 = \dots\dots\dots$

$832 - 400 = \dots\dots\dots$

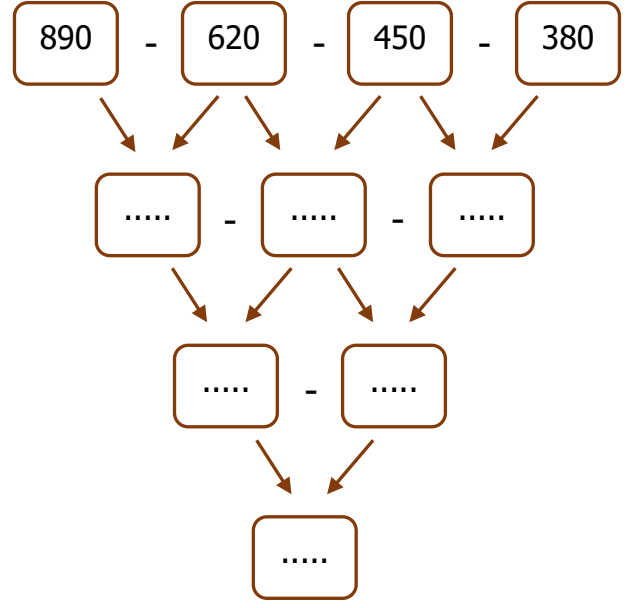
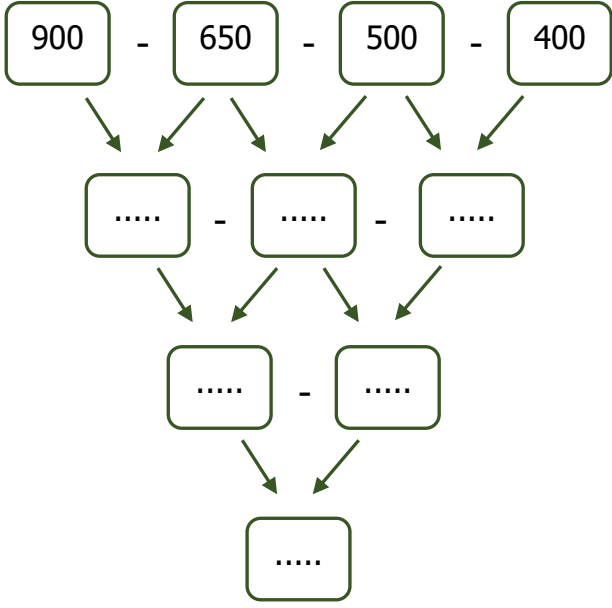
$641 - 500 = \dots\dots\dots$

$922 - 700 = \dots\dots\dots$

$653 - 300 = \dots\dots\dots$

$502 - 300 = \dots\dots\dots$

Aşağıdaki çıkarma işlemlerini zihinden yapalım.



Aşağıdaki çıkarma işlemlerini zihinden yaparak tabloyu doldurunuz.

-	→		
45	38		
34	25		

-	→		
38	27		
26	19		

-	→		
44	30		
35	23		

-	→		
50	25		
30	15		

-	→		
48	32		
41	26		

-	→		
33	24		
28	12		

-	→		
49	36		
38	24		

-	→		
40	33		
26	18		

-	→		
42	34		
27	24		